

Tên:

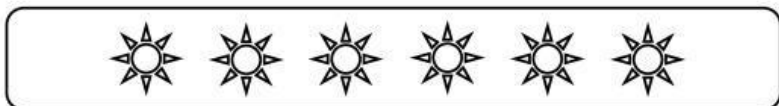
Lớp:

ÔN TOÁN 1

1. Tách, viết số rồi so sánh:




--	--	--



--	--	--

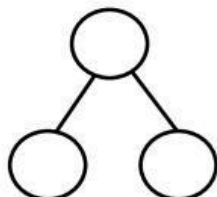
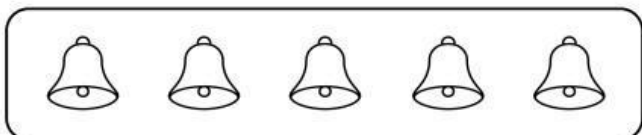
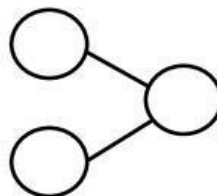
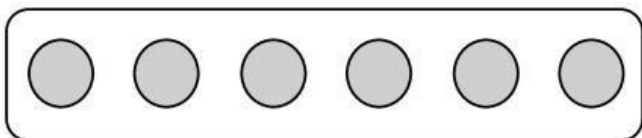
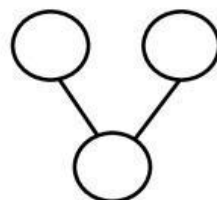
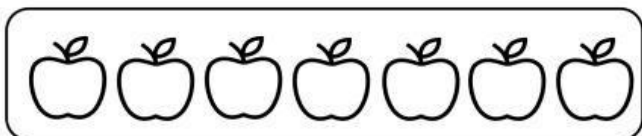
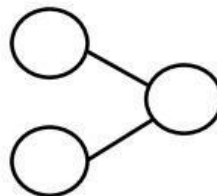
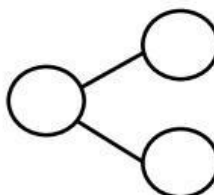
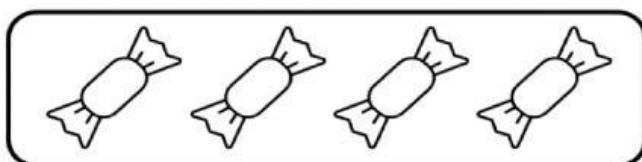


--	--	--





--	--	--

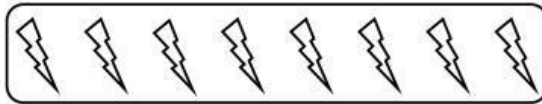
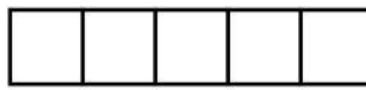
2. Gạch bớt rồi viết số vào sơ đồ tách-gộp.



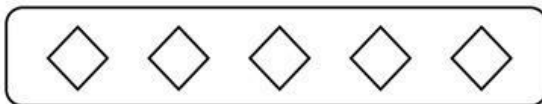
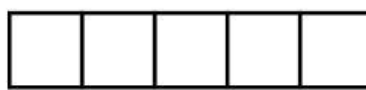
3. Gạch bớt rồi viết phép tính thích hợp.

4. Tô đen hình tròn rồi viết phép tính thích hợp.

