


### Matching Exercise

- |   |                   |
|---|-------------------|
| 1. Type letters and words with _____              | A. Keyboard       |
| 2. To move objects inside a computer _____        | B. Fridge         |
| 3. Stores files, songs, videos and pictures _____ | C. Mouse          |
| 4. A home device with microprocessor _____        | D. Monitor        |
| 5. A computer programming language _____          | E. Scratch        |
| 6. Displays soft output _____                     | F. Pen drive      |
| 7. Used to make a sound output _____              | G. Microphone     |
| 8. A software used for painting _____             | H. Speaker        |
| 9. The brain of a computer _____                  | I. Paint          |
| 10. Computers can add _____                       | J. CPU            |
|   | K. Excel          |
|   | L. Microsoft Word |
|   | M. Numbers        |

Draw a line to match each flow chart shape with function label on the right

1.



Represents a Decision making

2.




Starts a program

3.




Action or process

4.



Input or output data

5.



Direction of processing