

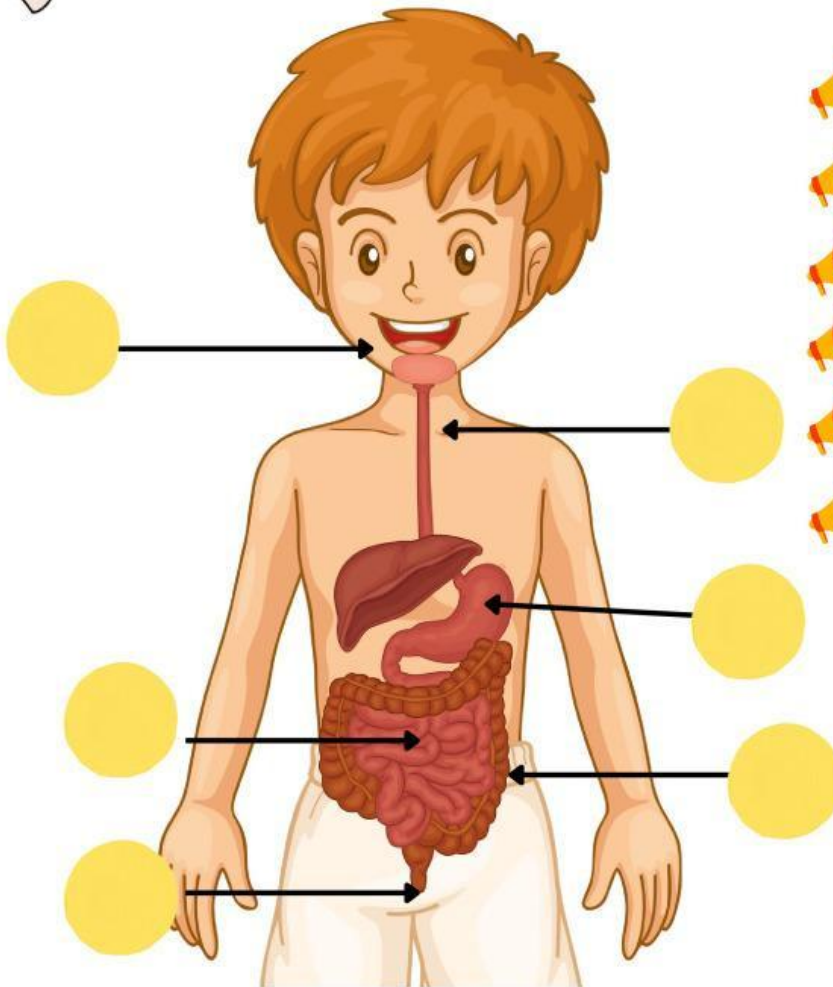
NATURAL SCIENCE: OUR HUMAN BODY







NAME: _____

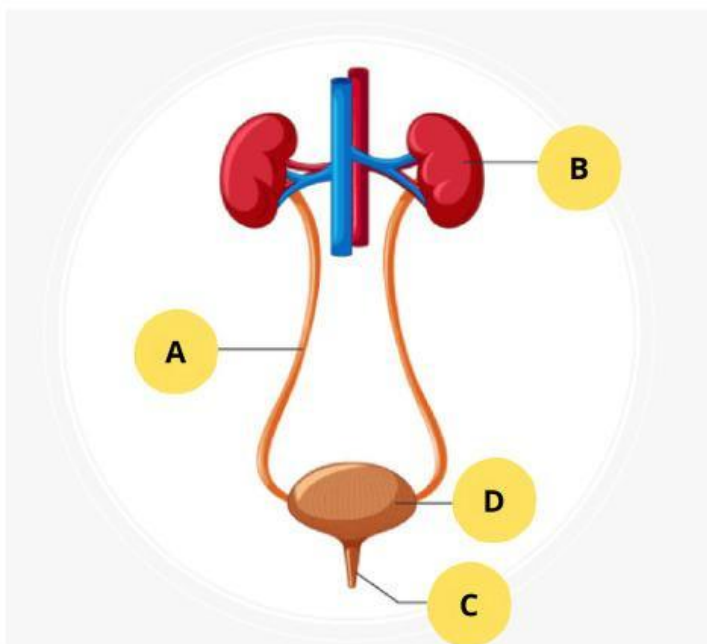
NUMBER: _____











1.- Match with letters.



-  A.- SMALL INTESTINE
-  B.- ANUS
-  C.- STOMACH
-  E.- TEETH AND TONGUE
-  F.- LARGE INTESTINE
-  G.- ESOPHAGUS

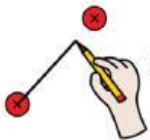


- KIDNEYS  
- URETHRA  
- BLADDER  
- URETERS  



2- What system is it? Circle a, b or c.

- The system that produces urine to clean the blood is...
a) Digestive b) Excretory c) Circulatory
- The system that takes all the nutrients from the food we eat is...
a) Circulatory b) Respiratory c) Digestive
- The system that takes the oxygen from the air and expels the CO₂ is....
a) Respiratory b) Digestive c) Circulatory
- The system that carries the blood to all the organs, pumped by the heart is...
a) Respiratory b) Excretory c) Circulatory



3.- Match the organs to their systems.

1.- Kidneys and bladder		Circulatory system
2., Lungs and bronchi		Digestive system
3.- Heart and capillaries		Excretory system
4.- Stomach , liver and pancreas		Respiratory system



4.- Write the name of the organs.

