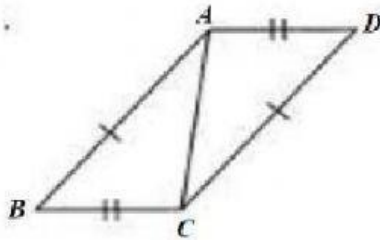


# Worksheet: Triangle Congruence Tests (SSS, SAS, AAS, RHS)

Complete the following.

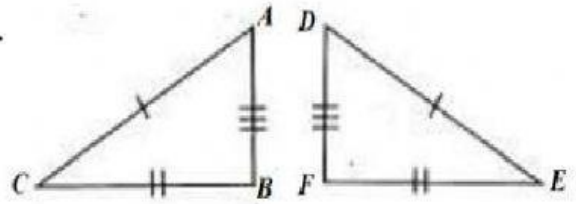
1.



$$\triangle ABC \cong \triangle \text{CDA}$$

by **SSS** congruence

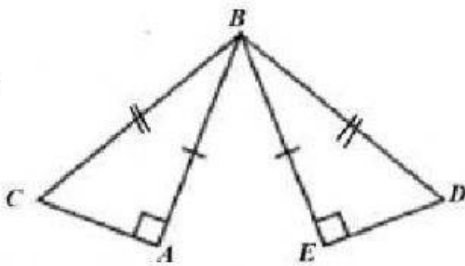
2.



$$\triangle ABC \cong \triangle \quad$$

by  congruence

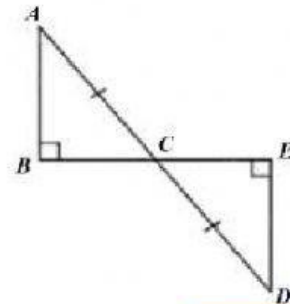
3.



$$\triangle ABC \cong \triangle \quad$$

by  congruence

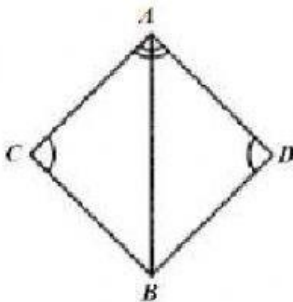
4.



$$\triangle ABC \cong \triangle \quad$$

by  congruence

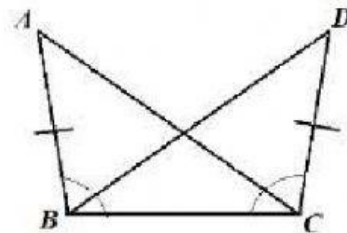
5.



$$\triangle ABC \cong \triangle \quad$$

by  congruence

6.



$$\triangle ABC \cong \triangle \quad$$

by  congruence