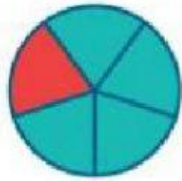
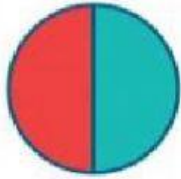


Interactive Worksheet: Week 16 / Self-Learning Program

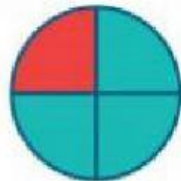
Match each figure where the colored part represents the given fraction



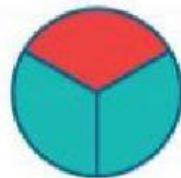
$$\frac{1}{3}$$



$$\frac{1}{4}$$



$$\frac{1}{5}$$



$$\frac{1}{2}$$

Write the fraction that represents the colored part by drag and drop

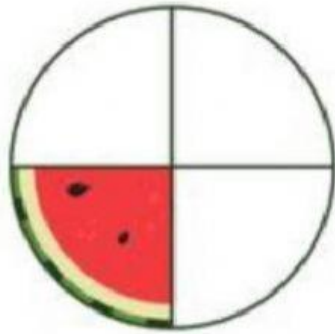
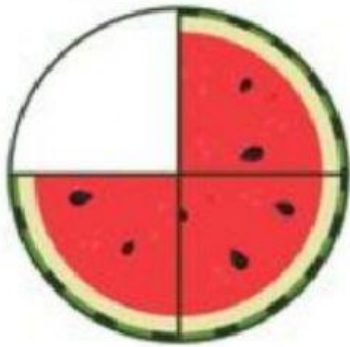
$$\frac{1}{8}$$

$$\frac{1}{6}$$

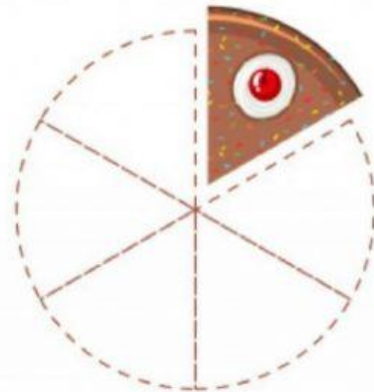
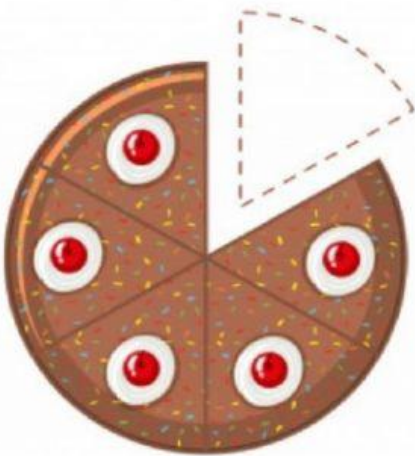
$$\frac{1}{7}$$



Circle the figure where the colored part represents the given fraction



$$\frac{1}{4}$$



$$\frac{1}{6}$$



$$\frac{1}{8}$$