
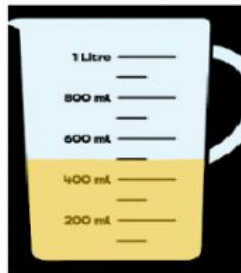





AL MAHD DAY BOARDING SCHOOL, EAST RIFFA
KINGDOM OF BAHRAIN
GRADE - III, MATHEMATICS
Worksheet :1
Capacity

I. Write the volume of water in each container.



II. Drag and drop the maximum capacity and volume of liquid in each container.

(1 litre , 700ml , 500ml , 550ml)



Capacity: _____

Volume: _____



Capacity: _____

Volume: _____

III. If you add 200ml of water in the jug. What would be the new reading?

