

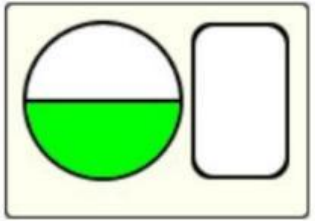
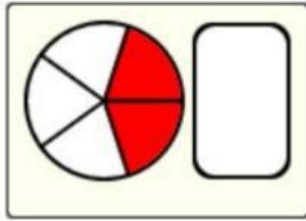
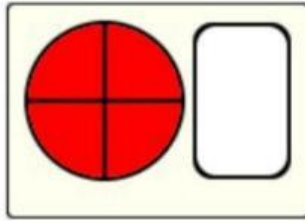
Représentation de FRACTIONS 1

1) Associe chaque fraction à la représentation correspondante :

$$\frac{3}{4}$$

$$\frac{3}{8}$$

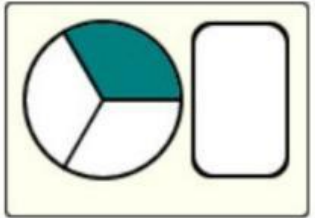
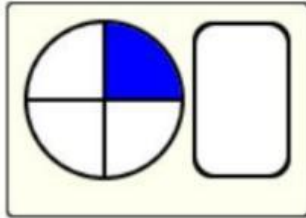
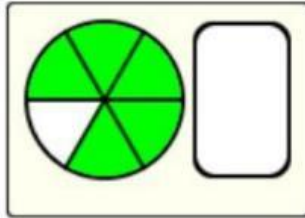
$$\frac{1}{2}$$



$$\frac{1}{3}$$

$$\frac{2}{5}$$

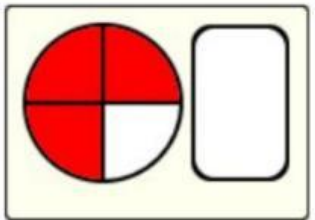
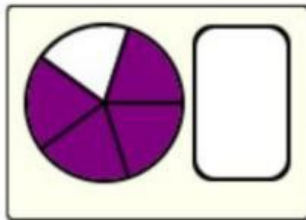
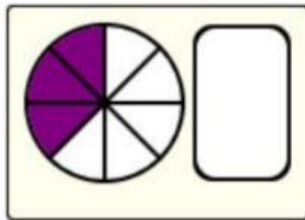
$$\frac{4}{5}$$



$$\frac{4}{4}$$

$$\frac{5}{6}$$

$$\frac{1}{4}$$



2) Donne une écriture fractionnaire des nombres suivants.

a. quatre dixièmes



b. cinq douzièmes



c. deux tiers



d. trois demis



e. six quarts



f. six vingt-cinquièmes

