






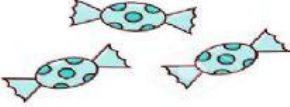
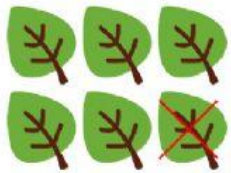


Complète les égalités :

| | | | | |
|---|---|---|---|----------------------|
|  | - |  | = | <input type="text"/> |
|  | - |  | = | <input type="text"/> |
|  | - |  | = | <input type="text"/> |
|  | - |  | = | <input type="text"/> |

 LIVEWORKSHEETS

Complète les égalités :



$$6 - 1 = 5$$



$$8 - 4 = \square$$



$$4 - 2 = \square$$



$$3 - 1 = \square$$



$$6 - 5 = \square$$



$$6 - 3 = \square$$

 LIVEWORKSHEETS