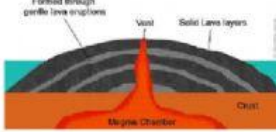
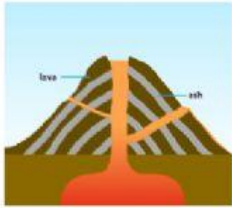



Type of volcanoes.

			<p>Match the pictures. Write down the number</p>
<input type="text"/>	<input type="text"/>	<input type="text"/>	<ol style="list-style-type: none"> <li>1. Cinder Cone Volcano</li> <li>2. Shield Volcano</li> <li>3. Composite Volcano</li> </ol>

Composite Volcano	Shield Volcano	Cinder- Cone Volcano	Features
<input type="text"/>	<input type="text"/>	<input type="text"/>	<ol style="list-style-type: none"> <li>1. Has wide and flat side</li> <li>2. Has many layers of volcanic rock</li> <li>3. Made up of small fragment of lava from a single vent</li> </ol>
<input type="text"/>	<input type="text"/>	<input type="text"/>	<ol style="list-style-type: none"> <li>1. Lava burst into air</li> <li>2. Lava Flows gently</li> <li>3. Lava flows from high- viscosity</li> </ol>