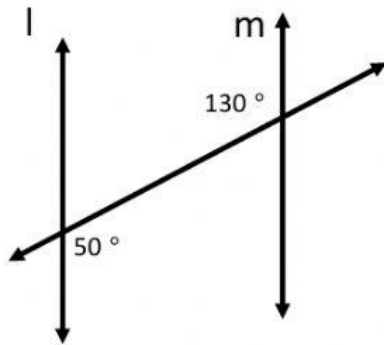


Name: _____

Practice Quiz

Parallel Lines

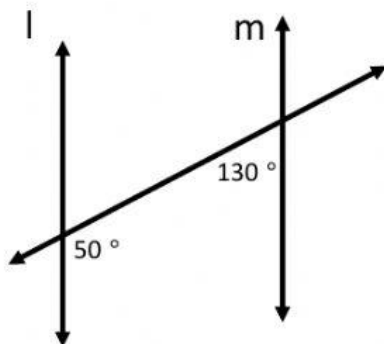
- 1) Determine if the lines are parallel and justify your answer.



Are the lines parallel? Answer yes or no:

How do you know? Cite the theorem that justifies your answer.

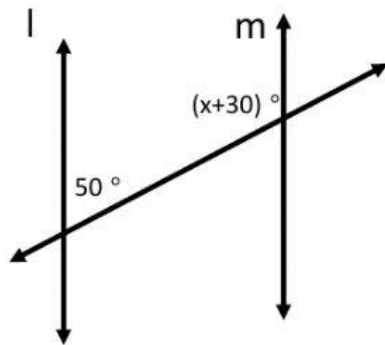
- 2) Determine if the lines are parallel and justify your answer.



Are the lines parallel? Answer yes or no:

How do you know? Cite the theorem that justifies your answer.

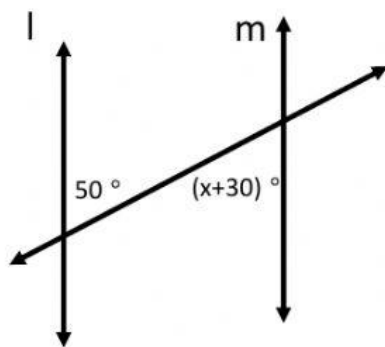
- 3) Find the value of x that will make the lines parallel.



Write the equation you will use to solve this:

Solve:

- 4) Find the value of x that will make the lines parallel.



Write the equation you will use to solve this:

Solve: