

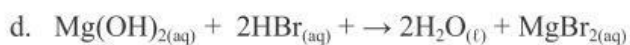
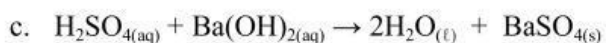
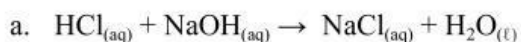
Neutralization Reactions

*Label the Acid, Base, Water, and Salt for each Reaction.

Neutralization Reaction Practice

1. Neutralization reactions are a specific type of _____ reaction.

2. ID the acid, base, salt in each of the following balanced neutralization reactions.



3. ID the salt that will be produced in the following unbalanced neutralization reactions.

Remember to criss-cross your charges!

