

Examples

Workout

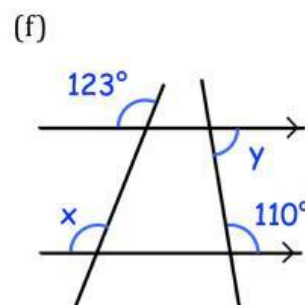
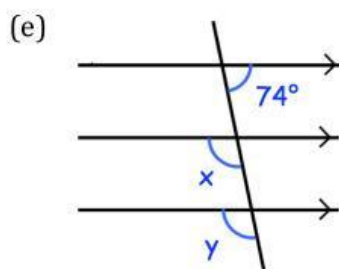
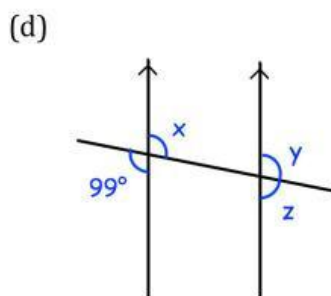
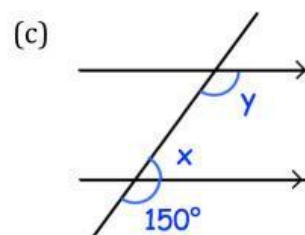
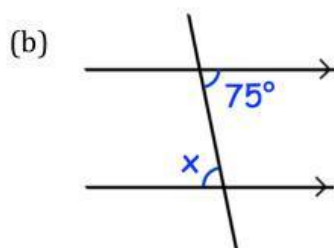
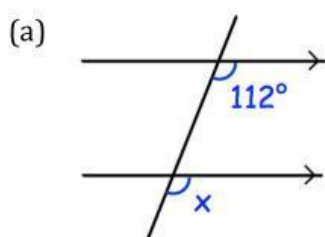


Click here

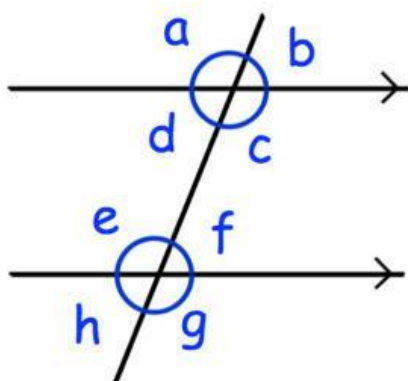


Scan here

Question 1: Write down the sizes of the lettered angles.



Question 2:



- Which angle is corresponding to angle c?
- Which angle is alternate to angle d?
- Which angle is corresponding to angle h?
- Which angle is vertically opposite to angle a?
- Which angle is alternate to angle e?
- Which angle is co-interior with angle c?
- Which angle is vertically opposite to angle h?
- Which angle is co-interior with angle e?
- Which angle is corresponding to angle a?
- Which angle is vertically opposite to angle g?