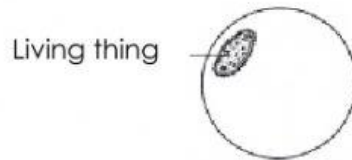


Life Processes of Microorganisms

Diagram below shows a drop of water from the pond being observed under the microscope



(a) What is the living thing observed under the microscope?

(b) Can the living thing be observed by the naked eyes? (✓) Tick



Yes

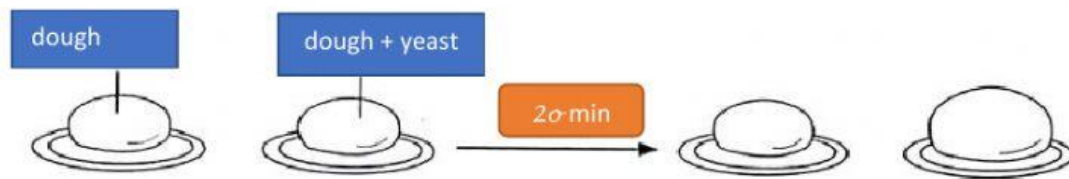


No

(c) Predict the position of the living after two minutes

(d) What is the conclusion for the investigation?

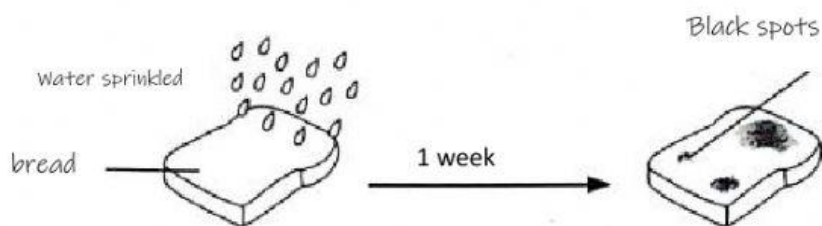
2. Diagram below shows two dough left for 20 minutes.



What is the observation for this investigation? State your inference.

Observation	←	
Inference	←	

3. Diagram below shows a piece of bread being sprinkled with water and left on a table for a week.



Why there is a blackspot on the bread after one week?

4. State 3 life processes undergo by microorganisms

