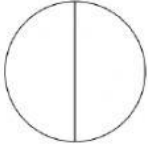

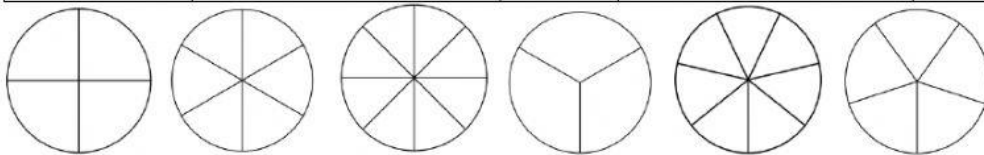


# Fraction Note-taker

Circle Model	Bar Model	Number of Parts	Unit Fraction- name one part of the whole	Name the fraction that shows two parts of the whole
		<b>2</b>	$\frac{1}{2}$ one half	$\frac{2}{2}$ two halves
		<b>3</b>		
		<b>4</b>		
		<b>5</b>		
		<b>6</b>		
		<b>7</b>		
		<b>8</b>		



$\frac{1}{7}$  one sevenths     $\frac{1}{4}$  one fourth     $\frac{1}{6}$  one sixth     $\frac{1}{8}$  one eighth  
 $\frac{2}{4}$  two fourths     $\frac{2}{6}$  two sixths     $\frac{2}{3}$  two thirds     $\frac{2}{7}$  two sevenths  
 $\frac{2}{8}$  two eighths     $\frac{2}{5}$  two fifths