

Nombre y Apellido: _____

Centenas, Decenas y Unidades

¡Completamos!

1. Lee atentamente y completa (5pts)

863

..... unidades, decenas y centenas

902

..... unidades, decenas y centenas

www.edufichas.com**290**

..... unidades, decenas y centenas

310

..... unidades, decenas y centenas

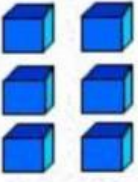

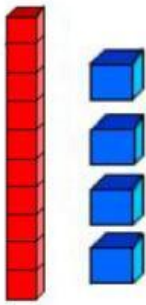
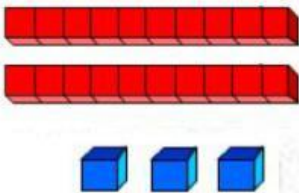
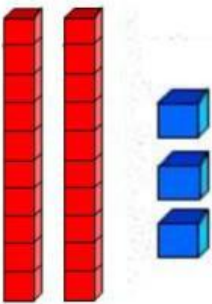

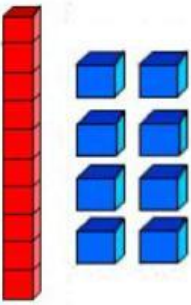
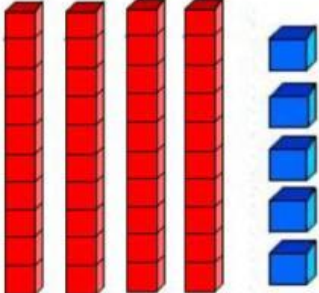
978

..... unidades, decenas y centenas

Nombre y Apellido: _____

¡Resolvemos!

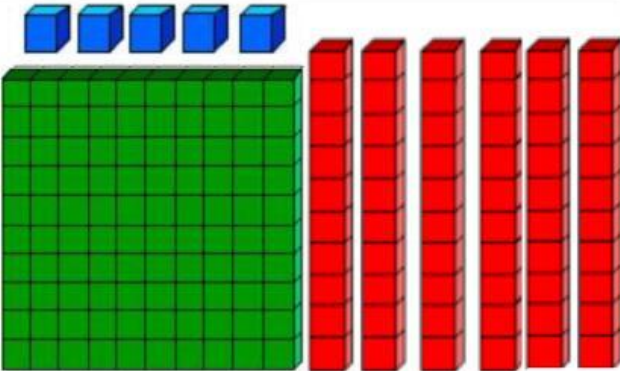
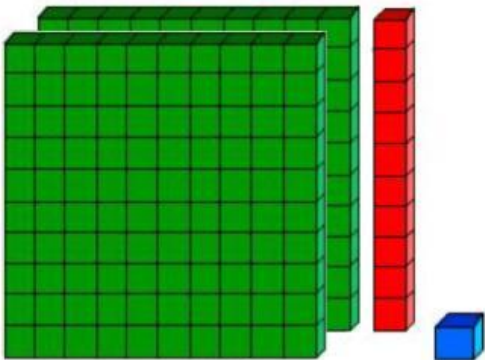
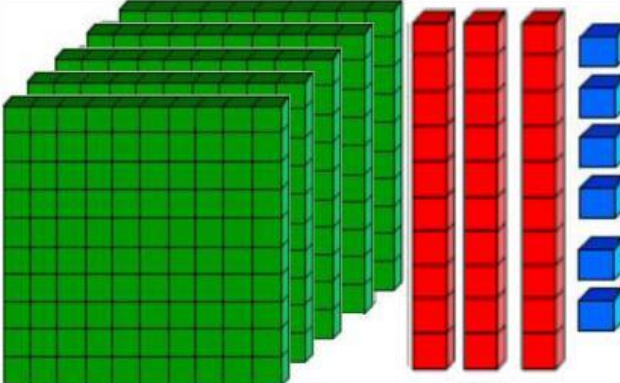
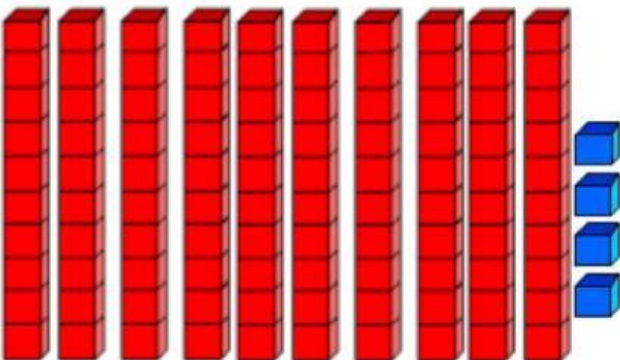
2. Cuenta las unidades y decenas. Luego escribe el número en el recuadro (8pts)

| | |
|---|--|
|  |  |
| <input type="text"/> | <input type="text"/> |
|  |  |
| <input type="text"/> | <input type="text"/> |
|  |  |
| <input type="text"/> | <input type="text"/> |
|  |  |
| <input type="text"/> | <input type="text"/> |

Nombre y Apellido: _____

¡Resolvemos!

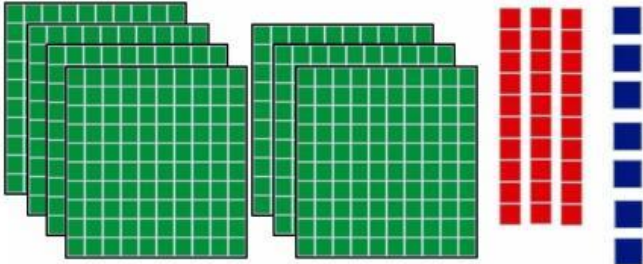
3. Observa e identifica las centenas, decenas y unidades de cada ejercicio y escribe el número según corresponda (4pts)

| | |
|---|--|
|  <div style="display: flex; justify-content: space-around; align-items: center;"> <div style="text-align: center;"> C <div style="border: 1px solid black; width: 60px; height: 60px; margin: 5px;"></div> Centenas </div> <div style="text-align: center;"> D <div style="border: 1px solid black; width: 60px; height: 60px; margin: 5px;"></div> Decenas </div> <div style="text-align: center;"> U <div style="border: 1px solid black; width: 60px; height: 60px; margin: 5px;"></div> Unidades </div> </div> |  <div style="display: flex; justify-content: space-around; align-items: center;"> <div style="text-align: center;"> C <div style="border: 1px solid black; width: 60px; height: 60px; margin: 5px;"></div> Centenas </div> <div style="text-align: center;"> D <div style="border: 1px solid black; width: 60px; height: 60px; margin: 5px;"></div> Decenas </div> <div style="text-align: center;"> U <div style="border: 1px solid black; width: 60px; height: 60px; margin: 5px;"></div> Unidades </div> </div> |
|  <div style="display: flex; justify-content: space-around; align-items: center;"> <div style="text-align: center;"> C <div style="border: 1px solid black; width: 60px; height: 60px; margin: 5px;"></div> Centenas </div> <div style="text-align: center;"> D <div style="border: 1px solid black; width: 60px; height: 60px; margin: 5px;"></div> Decenas </div> <div style="text-align: center;"> U <div style="border: 1px solid black; width: 60px; height: 60px; margin: 5px;"></div> Unidades </div> </div> |  <div style="display: flex; justify-content: space-around; align-items: center;"> <div style="text-align: center;"> C <div style="border: 1px solid black; width: 60px; height: 60px; margin: 5px;"></div> Centenas </div> <div style="text-align: center;"> D <div style="border: 1px solid black; width: 60px; height: 60px; margin: 5px;"></div> Decenas </div> <div style="text-align: center;"> U <div style="border: 1px solid black; width: 60px; height: 60px; margin: 5px;"></div> Unidades </div> </div> |

Nombre y Apellido: _____

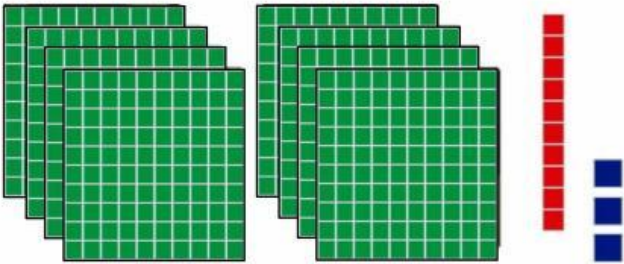
¡Resolvemos!

4. Ahora descomponemos los siguientes números (3pts)



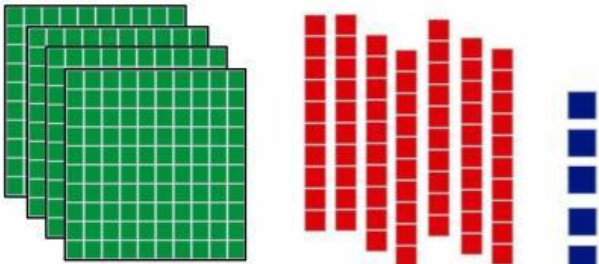
Se lee: _____

| | | | |
|------------|-----------|----------|--|
| centenas + | decenas + | unidades | |
| + | + | = | |



Se lee: _____

| | | | |
|------------|-----------|----------|--|
| centenas + | decenas + | unidades | |
| + | + | = | |



Se lee: _____

| | | | |
|------------|-----------|----------|--|
| centenas + | decenas + | unidades | |
| + | + | = | |