



Write the total beats of the tied notes!

Example:

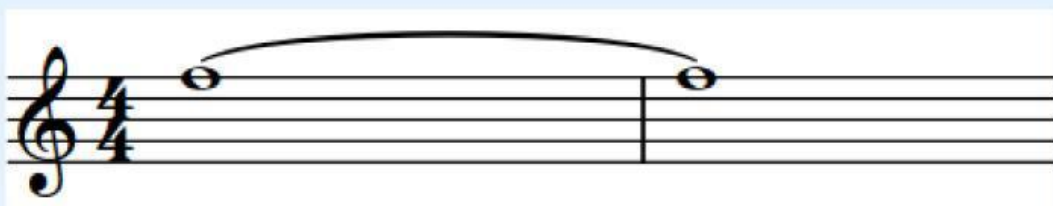


The note that tied are crotchet (1 beat) and semibreve (4 beats). So the total beats would be 5 beats

$$\boxed{1} + \boxed{4} = \boxed{5}$$



$$\boxed{} + \boxed{} = \boxed{}$$



$$\boxed{} + \boxed{} = \boxed{}$$



Write the total beats of the tied notes!



$$\square + \square = \square$$



$$\square + \square = \square$$

