

Name: _____
Date: _____
Score: _____

Interim Review #1.4 2023-24



Topic: Interim Review Mix Questions #1.4.

SCAN ME



St:

1 Hailee went to a grocery store to buy milk for her cake club.

- She bought 6 gallons of milk for her cake club.
- After she bought this amount of milk, the cake club had a total of 18 gallons of milk.

Which equation can be used to find the number of gallons of milk the cake club had before Hailee bought the milk at the grocery store?

A) $18 + 6 =$ __	B) $18 - 6 =$ __	C) $18 \div 6 =$ __	D) $18 \times 6 =$ __
------------------	------------------	---------------------	-----------------------

II BM NS ST

SS

2 The picture shows a big Pineapple on a scale. The unit of measurement on the scale is missing.

ST: Measurements

Which measurement is closest to the weight of the Pineapple?

A) 10 pounds	B) 9 pounds	C) 10 ounces	D) 9 ounces
--------------	-------------	--------------	-------------



3 How is 50,505 written in expanded notation?

ST: Number Forms

- A) $(5 \times 10,000) + (5 \times 1,000) + (5 \times 100)$ C) $(5 \times 10) + (5 \times 10) + (5 \times 1)$
B) $(5 \times 10,000) + (5 \times 100) + (5 \times 1)$ D) $(5 \times 10) + (5 \times 100) + (5 \times 1)$

4 Saliska collected newspapers for recycling for two weeks.

ST: Word- Problems

- Week 1: She collected 219 newspapers.
- Week 2: She collected 36 fewer newspapers than in Week 1.

What was the total number of newspapers she collected during these two weeks? Record your answer in the boxes below. Be sure to use the correct place value.

II BM NS ST

H	T	O	.





SS

- 5 The frequency table shows the numbers of votes for favorite career in Mr. Hansle's classes.
Favorite Career

ST: Find the Rule

Favorite Career	
Career	Votes
Doctor	III III
Pilot	III I
Zookeeper	III III III III
Firefighter	III III IIII

Which pictograph represents the information in the table?



- 6 America got talent, had a dancing contest and gave gift certificates to the winners. The names of the winners and their gift certificates are shown.

Scott \$1,307	Christina \$2,019	Roberto \$1,999	Paul \$2,170
---------------	-------------------	-----------------	--------------

ST: Compare Numbers

Who won gift certificates that were each worth more than \$1,500 but less than \$2,100?

- A) Christina and Paul only
B) Roberto and Christina only
C) Paul, Christina, and Roberto only
D) Scott, Christina, and Roberto only

- 7- Timmy Turner had 35 collectible baseball cards. He put them into a scrapbook. He put 7 baseball cards on each page. How many pages did Oliver need for these baseball cards?

ST: Word- Problems

A) 5	B) 28	C) 42	D) Not here
------	-------	-------	-------------

II BM NS ST

SS

- 8- Karim has 50 small cookies and 5 packages of large cookies. Each package of large cookies contains 6 cookies. How many cookies does Meeko have in all?

ST: Word- Problems

A) 61	B) 39	C) 80	D) 20
-------	-------	-------	-------

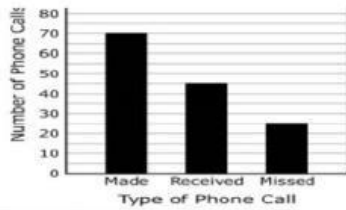
II BM NS ST

SS

9 The bar graph shows the numbers of phone calls Ms. Ray made, received, and missed in one month. Phone Calls.

What is the difference between the number of phone calls Ms. Vollar made and the combined number of phone calls she received and missed?

Phone Calls



II

BM

NS

ST

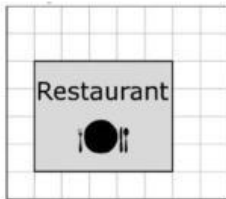
- A) 0 B) 8 C) 25 D) 140

SS

ST: Label Word Problem

10 The shaded rectangle on the grid represents a sign for a restaurant.

What is the area of the sign in square yards?



II

BM

NS

ST

1 square yard

SS

- A) 9 square yards B) 18 square yards C) 25 square yards D) 20 square yards

ST: Label Word Problem

11 Heather has a collection of trading cards. The list gives information about the number of trading cards in Heather's collection.

- The number is greater than 4,271.
- The number is less than 4,309.

Which number could be the number of trading cards in Heather's collection?

ST: Label Word Problem

- A) 4,293 B) 4,230 C) 4,182 D) 4,410

II


BM

NS

ST

SS

12 Elisha started lunch at 12:15 p.m. She finished lunch 30 minutes later.



ST: Time

What time did Elisha finish lunch?

- A) 1:00 pm B) 12:30 pm C) 12:45 pm D) 11:45 am

13 Mrs. Henson borrowed \$1,000 from a bank. The bank requires her to pay back the money with interest. Which of these phrases best explains what paying back with interest means?

- A) Paying back the money borrowed plus an additional amount of money
- B) Paying back none of the money that was borrowed
- C) Paying back only some of the money that was borrowed
- D) Paying back the exact amount of money that was borrowed

ST: Financial Literacy

14 Ms. Fletcher is a school librarian. The school pays Ms. Fletcher for the work she does. Which factor would most likely affect the amount of money Ms. Fletcher gets paid by the school?

- A) The number of people in Ms. Fletcher's family
- B) The number of days Ms. Fletcher works each year
- C) The distance Ms. Fletcher drives to work each day
- D) The amount of money Ms. Fletcher already has in her bank account

ST: Financial Literacy

15 Teresa collected rocks in April, May, and June.

ST: Label Word Problem

- She collected 17 rocks in May and 59 rocks in June.
- At the end of June, she had 210 rocks in her collection.

How many rocks did Teresa collect in April?

A) 286	B) 168	C) 256	D) Not Here
--------	--------	--------	-------------

16 Judy has a barrel in her backyard for collecting rainwater.

ST: Label Word Problem

- On Wednesday morning, the barrel contained 23 gallons of water.
- During a rainstorm on Wednesday afternoon, more water was collected in the barrel.
- After the rainstorm, the barrel contained 31 gallons of water.

How many gallons of water were collected during the rainstorm on Wednesday afternoon?

A) 8 gal	B) 12 gal	C) 54 gal	D) 7 gal
----------	-----------	-----------	----------