

Social Education Daily Test – Unit 1 and 2
Academic Year 2023/2024

A. Multiple Choice**1. Pay Attention to the following information.**

In 2015, a survey was conducted by the Geospatial Information Agency (*Badan Informasi Geospasial*) and the Indonesian Navy's Hydrographic and Oceanographic Center (*Pusat Hidrografi dan Oseanografi*) and it was found that the land area of Indonesia is 1,919,440 km² and the ocean area is 3,278,810 km².

Based on the information above, it can be concluded that Indonesia's ocean area is larger than its land area. That's why Indonesia is called as

- a. island country
 - b. superpower country
 - c. developed country
 - d. Malay country
2. The eastern border of Indonesia is
- a. Timor Leste
 - b. Papua New Guinea
 - c. Malaysia
 - d. Brunei Darussalam
3. The western border of Indonesia is
- a. Malaysia
 - b. Laut Cina Selatan
 - c. Hindia Ocean
 - d. Australia
4. The astronomical position of Indonesia is
- a. 6°NL-11°NL and 95°WL-141°EL
 - b. 6°NL-11°SL and 95°EL-141°EL
 - c. 9°NL-11°SL and 91°WL-141°EL
 - d. 9°SL-11°SL and 91°WL-141°EL
5. Indonesia is located between the Pacific Ocean, the Indian Ocean, the continents of Asia and the continent of Australia. The statement above is the location of Indonesia is based on ... location.
- a. astronomic
 - b. geographic
 - c. strategic
 - d. economic
6. **Pay attention to the impact of the astronomical and geographical locations of Indonesia below.**
- 1) Has 2 seasons; dry and rain
 - 2) Has 3 time zones
 - 3) Has a tropical climate
 - 4) Has a rich flora and fauna
 - 5) Diverse socio-cultural community
 - 6) Has strategic economical position because it is traversed by international trade and shipping routes

Based on the data above, the impact of Indonesia's astronomical location is indicated by number

- a. 1), 3), 5)
- b. 1), 2), 3)
- c. 2), 3), 4)
- d. 2), 4), 6)

7. The following are the provinces in Indonesia which are located in the West Indonesia Time Zone, **except**
 - a. Lampung
 - b. West Kalimantan
 - c. East Java
 - d. South Sulawesi
8. It's 10 am in Merauke, then it is ... in Solo.
 - a. 8 a.m
 - b. 9 a.m
 - c. 11 a.m
 - d. 12 p.m
9. Bali Island is included in
 - a. Indonesia Western Standard Time (WIB)
 - b. Indonesia Central Standard Time (WITA)
 - c. Indonesia Eastern Standard Time (WIT)
 - d. Indonesia Southern Standard Time (WIS)
10. According to the geological location, Indonesia is on 3 world plates; the Indo-Australian plate, the Eurasian plate and the Pacific plate. It makes Indonesia prone to
 - a. earthquake
 - b. strong winds
 - c. flood
 - d. crime
11. There are two mountain trails causing Indonesia has many volcanoes which have rich minerals, namely
 - a. Sircum Mediteranian and Sircum Pasific
 - b. Sircum Anatonian and Sircum Antony
 - c. Sircum Antarctic and Sircum Atlantic
 - d. Sircum Gaza and Sircum Gazi
12. The line that separates the northern hemisphere from the southern hemisphere is a/an ... line.
 - a. longitude
 - b. north latitude
 - c. south latitude
 - d. Equator
13. Google Maps and Google Earth belong to
 - a. flat maps
 - b. relief maps
 - c. blind maps
 - d. digital maps
14. The person who makes a map is called
 - a. a map expert
 - b. a cartography
 - c. a cartographer
 - d. a photographer
15. Look at the following map.



A part of the map indicated by the circle is

- a. a map title
- b. a map inset
- c. a map index
- d. a map scale

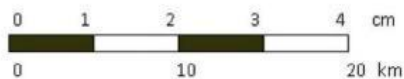
16. Look at the following legend of map.

1. = capital pf the province	8. = inactive volcano
2. = district capital	9. = harbor
3. = district	10. = provincial boundary
4. = active volcano	11. = rail road
5. = lake	12. = school
6. = river	13. = highway
7. = airport	

From the legend of map above which includes the line symbol is shown number

- 1, 7, 12
 - 5, 10, 11
 - 6, 10, 13
 - 11, 12, 13
17. Color symbols on maps are usually used to describe
- seaports, rivers, lakes, highways, mountainous areas
 - highways, railways, national borders
 - highland areas, lowland areas, rivers, airports
 - lakes, mountainous area, lowlands, highlands

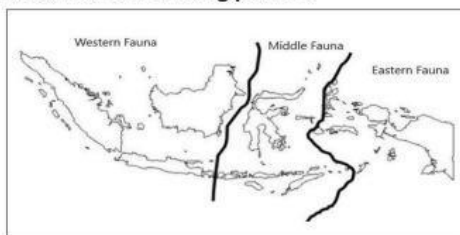
18. Look at the following scale.



If the distance on the map is **3cm** then the actual distance is ... km.

- 12.5
 - 13
 - 15
 - 16.5
19. The seabed is lower than the surrounding area is called
- continental slope
 - bottom of the sea
 - sea trench
 - sea back

20. Look at the following picture.



The distribution of fauna in western and central Indonesia is divided by ... line.

- Weber
 - Wallacea
 - Khatulistiwa
 - Equator
21. Look at the picture below.



The picture shows an endemic animal of Indonesia. It can be found in ... Indonesia.

- western
- eastern
- central
- southern

22. Many sago plants are characteristics of the distribution of flora (plants) in parts of ... Indonesia.
 - a. western
 - b. eastern
 - c. central
 - d. southern
23. The following types of fauna exist in Eastern Indonesia, **except**
 - a. Cendrawasih
 - b. Burung Maleo
 - c. Wallaby
 - d. One-Horned Rhinoceros
24. Central Indonesian fauna has its own characteristics and types that are not found elsewhere in Indonesia. The central Indonesian fauna is also known as the ... fauna.
 - a. oriental
 - b. endemic
 - c. Asiatic
 - d. Australic
25. An example of a renewable natural resource is
 - a. plants
 - b. crude oil
 - c. coal
 - d. gold
26. Look at the table below for the number of Indonesian fishery production.

Year	Production Quantity (in million ton)
2008	354,535
2009	358,664
2010	341,323
2011	6,502
2012	576,632
2013	9,190

- Based on the data above, the largest fish production in Indonesia was in
- a. 2008
 - b. 2009
 - c. 2010
 - d. 2012
27. Natural resources need to be preserved because
 - a. uneven spread
 - b. many were broken
 - c. the amount is limited
 - d. being rare
 28. Resources in the fishery sector can be the main factor of the national economy movement because
 - a. the width of the lakes
 - b. the diversity of fishery resources
 - c. the ocean's depth
 - d. the numbers of rivers
 29. Natural resources can be said to be **non-renewable** if
 - a. it takes very fast time to recover natural
 - b. it doesn't take time to recover natural
 - c. it presents in the mainland
 - d. it takes a long time to recover natural
 30. The results of natural resources processing are used properly for the purpose of
 - a. preventing erosion hazards
 - b. prosperity of the society
 - c. preventing flood
 - d. preventing natural disasters


B. Short Answer

31. One of the map elements used to show the description of all objects that appear on the map or part of the map that contains symbols is
32. Water, air, and soil are ... natural resources.
33. Look at the following picture.



Imitation of the earth ball in a small form is called

34. Komodo Island National Park is a natural animal breeding ground of
35. Elephant, tiger, orangutan can be found in ... Indonesia.
36. The typical flora of eastern Indonesia which is the staple food of the people of Maluku and Papua is
37. Look at the following picture.



The figure shows the map components in the form of

38. Singapore is the border of the Indonesia at
39. Look at the following picture!



Rafflesia Arnoldi is a typical flora of

40. A set of maps that are put together in the form of a book is called