


LESSON 1

1 Match the times.

- | | |
|------------------------------------|---------------|
| 1. <u>c</u> It's half past ten. | a. 6:45 |
| 2. _____ It's four o'clock. | b. 8:55 |
| 3. _____ It's noon. | c. 10:30 |
| 4. _____ It's a quarter after two. | d. 12:00 P.M. |
| 5. _____ It's five to nine. | e. 4:00 |
| 6. _____ It's six ten. | f. 6:10 |
| 7. _____ It's a quarter to seven. | g. 12:00 A.M. |
| 8. _____ It's midnight. | h. 2:15 |

2 Look at the pictures. Are the people early, late, or on time? Write sentences.

1. _____



2. _____




3. _____

LESSON 3


10 Match the ordinal numbers with the people. Draw lines.

fifth first ninth eleventh seventh thirteenth



second twelfth sixth eighth fourth fifteenth

11 Look at the pictures. Write the months for each type of weather where you live.



1. _____
2. _____
3. _____

12 Complete the sentences with an ordinal number or a month.

1. October is the _____ month of the year.
2. _____ is the fifth month of the year.
3. _____ is the second month of the year.
4. March is the _____ month of the year.
5. December is the _____ month of the year.
6. _____ is the eleventh month of the year.
7. June is the _____ month of the year.
8. _____ is the eighth month of the year.