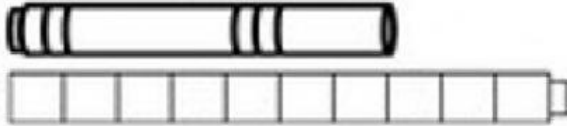


Nonstandard Measurement Part 1 – Test:
Length, Height, Distance, and Area

Measure and write down how long or how tall each object is.

1. How long is the marker?



_____ cubes

2. How long is the crayon?



_____ paperclips

3. How long is the eraser?




_____ coins

4. How long is the pencil?



_____ blocks


5. How tall are both ostriches?





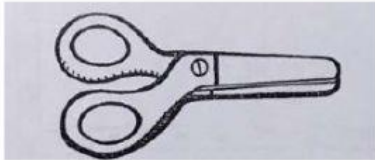
_____ blocks

_____ blocks

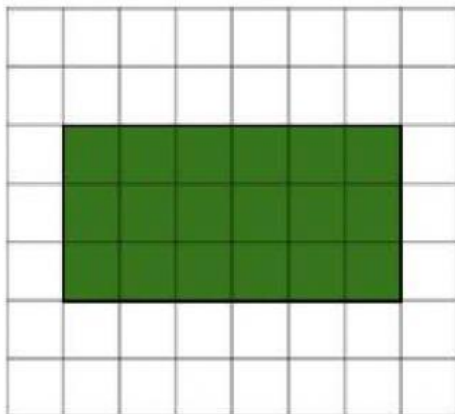
6. Select which objects are shorter:



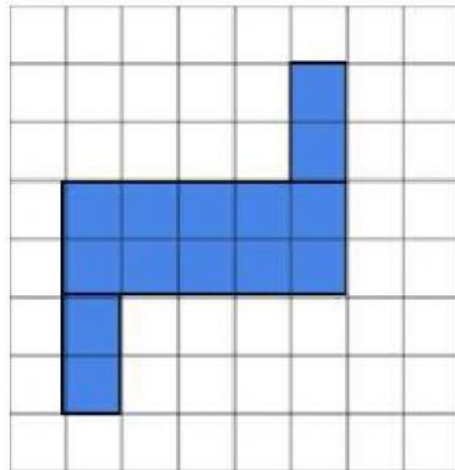
7. Select which objects are longer:



8. What is the area of the surfaces?



_____ squares

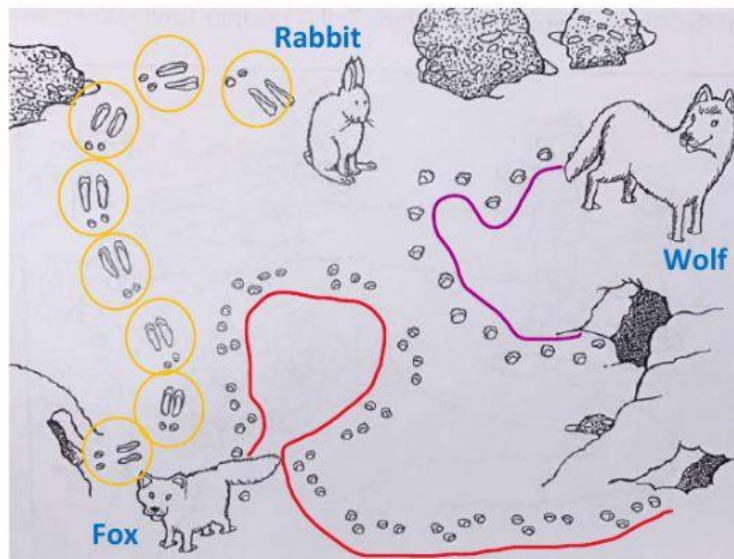


_____ squares



_____ squares

Look at the picture below and measure the distance that each animal has travelled.



9. The fox travelled the _____ distance.
10. The wolf travelled the _____ distance.
11. The rabbit travelled _____ steps.

Use the words below to fill in the blanks:

Shortest

Longest