



# CENTRO EDUCACIONAL KÍSSILA NEVES

Aluno (a): \_\_\_\_\_

Turma/Série: \_\_\_\_\_ Data: \_\_\_\_/\_\_\_\_/\_\_\_\_

Disciplina: \_\_\_\_\_ Professor (a) \_\_\_\_\_

## ATIVIDADE DE MATEMÁTICA

### USANDO O MATERIAL DOURADO



Descubra qual é o número formado preenchendo o quadro valor de lugar:

= 1 CENTENA

= 1 DEZENA

= 1 UNIDADE

No último número formado, as peças não estão organizadas. Você acha que faz alguma diferença na quantidade total?

C	D	U

C	D	U

C	D	U

C	D	U

C	D	U



Arraste o Material Dourado correspondente aos valores apresentados:


15 2 →


160 →


40 →


105 →


O algarismo 0(zero) é usado em alguns números ao lado. Você sabe o que ele representa? Converse com seus amigos e registrem as conclusões.










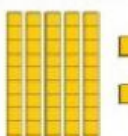














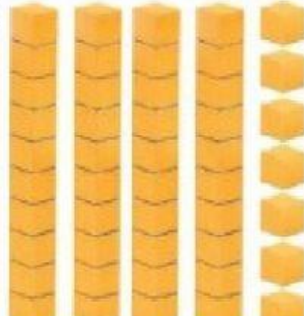
Assinale a representação correta do número 47:

A) 


☐

B) 

☐

C) 

☐

D) 

☐

