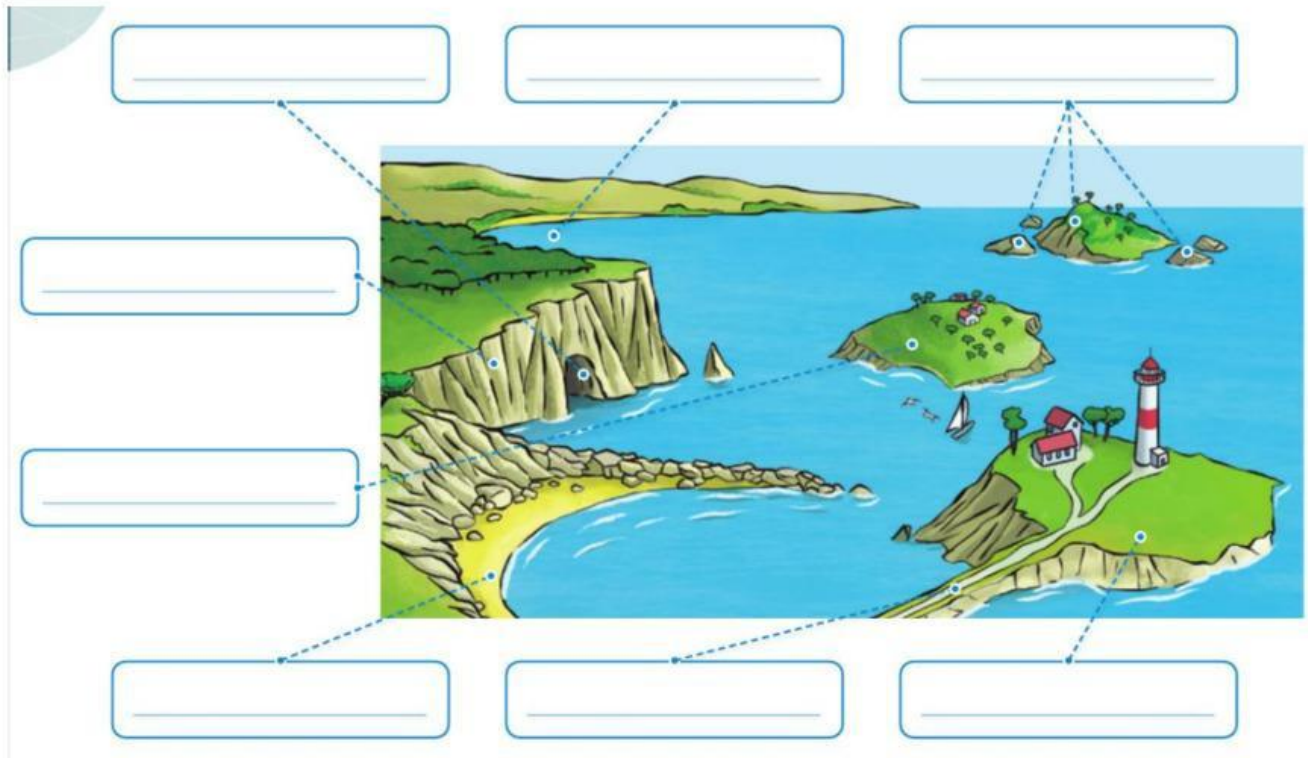




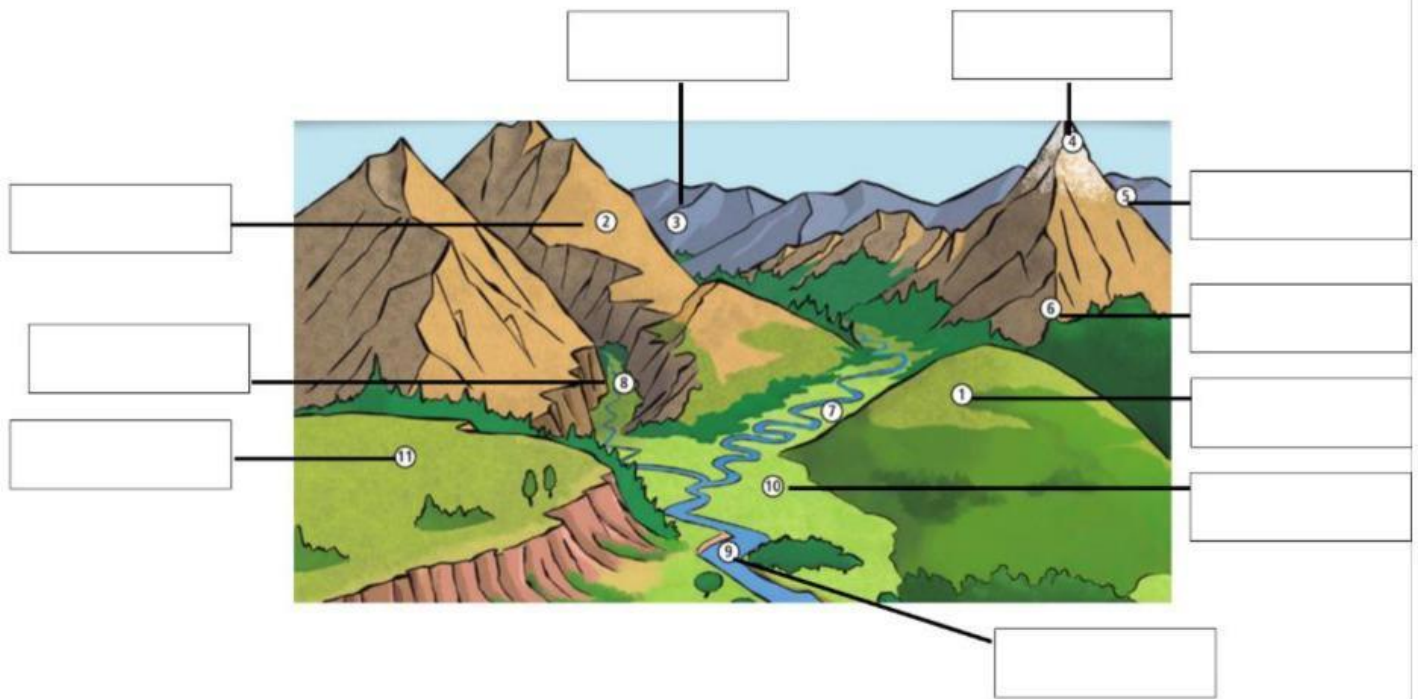
**1. Write the parts of the coastal landforms.**



**2. Fill the gaps of the coastal landform definitions.**

- A cliff is a \_\_\_\_\_, \_\_\_\_\_ land on the \_\_\_\_\_.
- Some cliffs have \_\_\_\_\_ in them.
- An \_\_\_\_\_ is land with water around it.
- An archipelago is a \_\_\_\_\_ of \_\_\_\_\_.
- An \_\_\_\_\_ is a small island.
- A peninsula has \_\_\_\_\_ around the most of its sides.
- An \_\_\_\_\_ connects a peninsula to the coast.
- A bay is \_\_\_\_\_ part of the \_\_\_\_\_. Some bays have a \_\_\_\_\_ with sand or stones.

### 3. Write the parts of the inland landforms.



### 4. Answer these questions.

What is a hill?

---


What is a mountain?

---

What is a mountain range?

---

### 5. Write the parts of the mountain.



**6. Match the name to its definition:**

Valley

flow through valleys  
and across plains.

Canyon

is a low, flat area.

Rivers

is a low area  
between hills or  
mountains.

Plain

is a high, flat area  
with low land  
around it.

Plateau

is a deep valley  
with high, vertical  
sides.

**7. What are these minerals? Choose the correct option.**



**8. Choose: True or False.**

1. Minerals are solid substances with an internal structure. **True / False**
2. Minerals can have 1, 2 or more particles. **True / False**
3. Rocks are liquid substances that contains minerals. **True / False**
4. There are 2 types of rocks igneous and sedimentary rocks. **True / False**
5. Metamorphic rocks don't change under a lot of heat. **True / False**

