

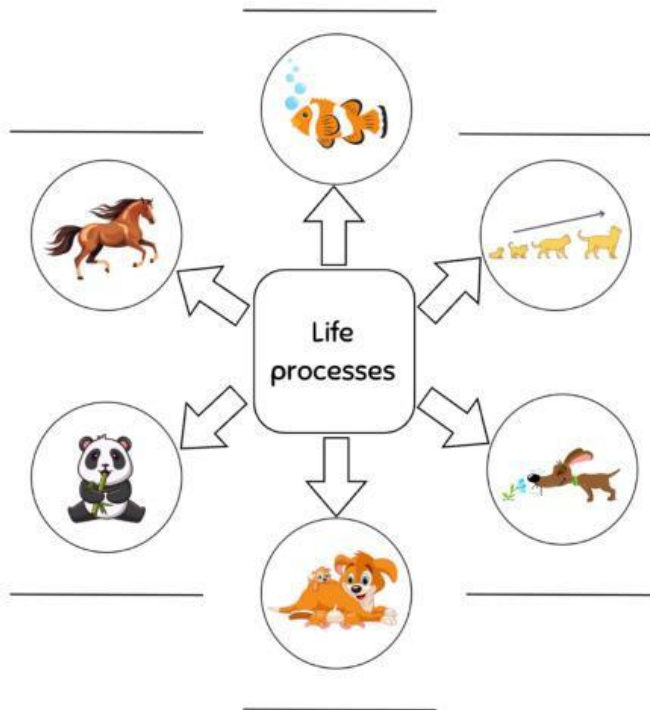
Name: _____

Class: _____

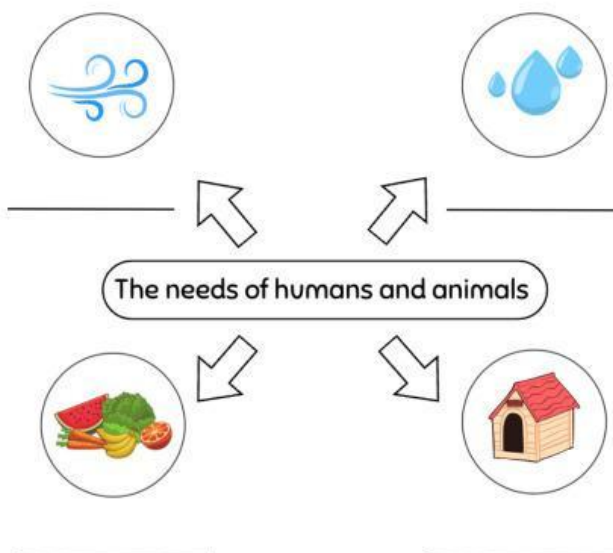
MIDTERM REVIEW

A. Language check

I. Complete the diagrams with the given words.



move
breathe
grow
use senses
eat
reproduce



water
air
shelter
food

2. Label the parts of the plant and then draw lines to connect the labels to the right part.

F _____



L _____

S _____

R _____

3. Look. Unscramble the letters to form a correct word.



cihkc



ppau



letrofg

.....

.....

.....



enarget



byba



lduat

.....

.....

.....



ightl



litw



hythlea

.....


.....

.....

B. Content check

1. Circle the correct answer.

a. Look. What is the missing stage in the life cycle of a butterfly?



A.



B.



C.



b. Animals and humans need to get nutrients.

A. shelter



B. rock



C. food



c. Animals' babies are called

A. life processes

B. offspring

C. air

d. A(n) starts small, and then grows.

A. baby



B. adult



C. teenager



e. When we eat carrots , we are eating the

A. stems

B. seeds

C. roots



f. give birth to a live young and feed their young with milk.

A. Mammals



B. Amphibians



C. Birds



2. Choose the words in the box to fill in the blanks.

healthy – water – wilt – toddler – bulbs

a. When plants do not have enough water, it will
















b. is one of the human stages.

c. Some plants grow from

d. Plants need the right amount of to grow.

e. A plant has enough sunlight.

3. Odd one out.

1.			
2.			
3.			
4.			
5.			

4. Read the sentences. Tick (✓) True or False.

- Breathing and reproducing are life processes.
- A froglet loses its tail and grows into a butterfly.
- A chick is a baby chicken.
- Flower is a plant part.
- Plant need sunlight, hot temperature and water to grow.
- When we eat apple, we are eating the stem.

True	False
<input type="checkbox"/>	<input type="checkbox"/>
<input type="checkbox"/>	<input type="checkbox"/>
<input type="checkbox"/>	<input type="checkbox"/>
<input type="checkbox"/>	<input type="checkbox"/>
<input type="checkbox"/>	<input type="checkbox"/>
<input type="checkbox"/>	<input type="checkbox"/>