





# SOCIAL STUDIES QUESTIONS



1. Complete with the corresponding map.

Political Map - Physical map - Climatological map - Production map

	<p><input type="text"/></p> <p>This shows an area divided into countries, provinces or regions.</p>		<p><input type="text"/></p> <p>This shows mountains, rivers, vegetation, among other elements.</p>
	<p><input type="text"/></p> <p>They show the climates in a region.</p>		<p><input type="text"/></p> <p>This shows the natural resources of a country or region.</p>

2. Look at the pictures and write if they are **maps** or **plans**.



3. Connect with a line, the type of map with the information it shows.

Political map

mountains and rivers

Physical map

countries and provinces

4. Label the **urban** and **rural** parishes.



---

---

5. Match the activities done in the rural parish.



fishing

farming

agriculture

6. Match the jobs



DENTIST

BAKER

MUSICIAN

7. Color flag of our canton.



8. Name your canton.

---