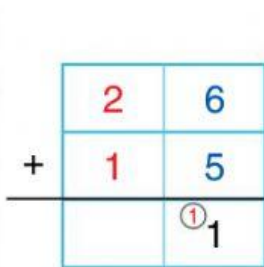
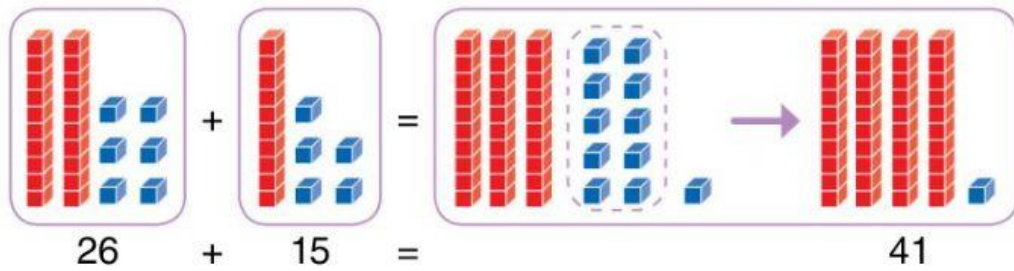
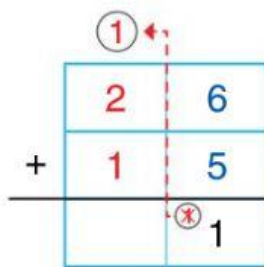


Sumas con llevadas

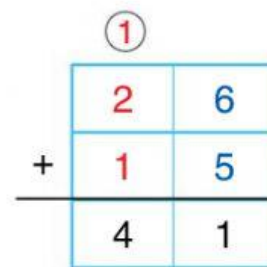
Observa, lee y aprende.



1.º Suma las unidades.
 $6U + 5U = 11U$



2.º Como el resultado es mayor que 9, lleva 1 decena a su columna.

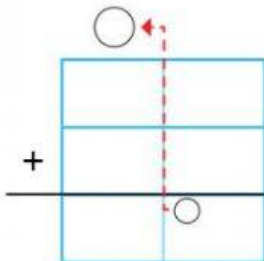


3.º Suma las decenas, incluyendo la que te llevas.
 $1D + 2D + 1D = 4D$

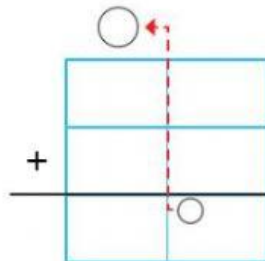
1 Coloca y suma.



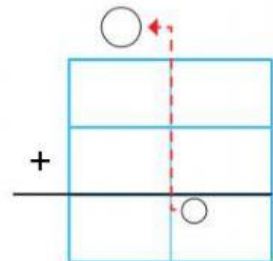
23 + 37



48 + 25



19 + 56



18 dieciocho