





الطرح الرأسي


اكتب الجمل العددية و اطرح :



$$\begin{array}{r} \square \\ \square \\ \hline \square \end{array}$$
$$\square - \square = \square$$


$$\begin{array}{r} \square \\ \square \\ \hline \square \end{array}$$
$$\square - \square = \square$$


$$\begin{array}{r} \square \\ \square \\ \hline \square \end{array}$$
$$\square - \square = \square$$


$$\begin{array}{r} \square \\ \square \\ \hline \square \end{array}$$
$$\square - \square = \square$$


$$\begin{array}{r} \square \\ \square \\ \hline \square \end{array}$$
$$\square - \square = \square$$


$$\begin{array}{r} \square \\ \square \\ \hline \square \end{array}$$
$$\square - \square = \square$$