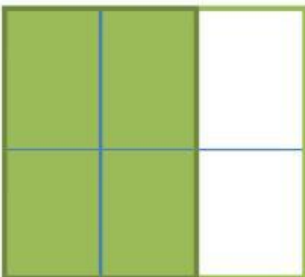
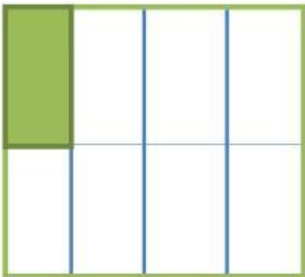
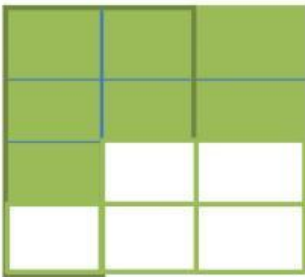
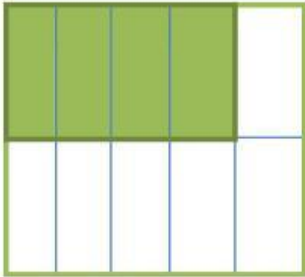




Instrucciones: observa las siguientes figuras y relaciona las fracciones con la columna que corresponda.



$$\frac{2}{4}$$



$$\frac{4}{6}$$



$$\frac{1}{8}$$



$$\frac{4}{10}$$



$$\frac{7}{12}$$