

Name \_\_\_\_\_

Grade One Geometry Assessment

February 2021

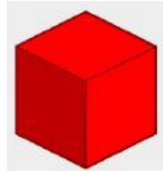
1. Drag and drop the name of each shape.

cone

sphere





cylinder

cube



2. Look at the shapes shown. Can they roll, slide or stack?



Shape	Can it roll?	Can it stack?	Can it slide?
			
			
			
			

3. Match these:

a) Which shape can roll, stack and slide?

sphere

b) Which shape can roll, but not slide?


cone and sphere


c) Which shapes cannot stack?

cylinder

4. What shape am I? Select the correct answer.



a) I have one curved face and two flat circular faces. I am a 

b) I am a party hat. I am a 


c) The world has my shape. I am a 

d) I have 6 flat square faces. I am a 

5. Drag and drop these shapes to create a rocket.



6. Drag and drop to create a AB Pattern



--	--	--	--	--	--

7. Complete the patterns

8. Dress up the community with these bunting flags for independence

