

Social Education Level 7 ICP**A. Multiple Choice****1. Pay Attention to the following information.**

In 2015, a survey was conducted by the Geospatial Information Agency (*Badan Informasi Geospasial*) and the Indonesian Navy's Hydrographic and Oceanographic Center (*Pusat Hidrografi dan Oseanografi*) and it was found that the land area of Indonesia is 1,919,440 km² and the ocean area is 3,278,810 km².

Based on the information above, it can be concluded that Indonesia's ocean area is larger than its land area. That's why Indonesia is called as

- a. island country
 - b. superpower country
 - c. developed country
 - d. Malay country
2. The eastern border of Indonesia is
- a. Timor Leste
 - b. Papua New Guinea
 - c. Malaysia
 - d. Brunei Darussalam
3. The western border of Indonesia is
- a. Malaysia
 - b. Laut Cina Selatan
 - c. Hindia Ocean
 - d. Australia
4. The astronomical position of Indonesia is
- a. 6°NL-11°NL and 95°WL-141°EL
 - b. 6°NL-11°SL and 95°EL-141°EL
 - c. 9°NL-11°SL and 91°WL-141°EL
 - d. 9°SL-11°SL and 91°WL-141°EL
5. Indonesia is located between the Pacific Ocean, the Indian Ocean, the continents of Asia and the continent of Australia. The statement above is the location of Indonesia is based on ... location.
- a. astronomic
 - b. geographic
 - c. strategic
 - d. economic
6. **Pay attention to the impact of the astronomical and geographical locations of Indonesia below.**
- 1) Has 2 seasons; dry and rain
 - 2) Has 3 time zones
 - 3) Has a tropical climate
 - 4) Has a rich flora and fauna
 - 5) Diverse socio-cultural community
 - 6) Has strategic economical position because it is traversed by international trade and shipping routes

Based on the data above, the impact of Indonesia's astronomical location is indicated by number














- a. 1), 3), 5)
- b. 1), 2), 3)
- c. 2), 3), 4)
- d. 2), 4), 6)

7. The following are the provinces in Indonesia which are located in the West Indonesia Time Zone, **except**
 - a. Lampung
 - b. West Kalimantan
 - c. East Java
 - d. South Sulawesi
8. It's 10 am in Merauke, then it is ... in Solo.
 - a. 8 a.m
 - b. 9 a.m
 - c. 11 a.m
 - d. 12 p.m
9. Bali Island is included in
 - a. Indonesia Western Standard Time (WIB)
 - b. Indonesia Central Standard Time (WITA)
 - c. Indonesia Eastern Standard Time (WIT)
 - d. Indonesia Southern Standard Time (WIS)
10. According to the geological location, Indonesia is on 3 world plates; the Indo-Australian plate, the Eurasian plate and the Pacific plate. It makes Indonesia prone to
 - a. earthquake
 - b. strong winds
 - c. flood
 - d. crime
11. There are two mountain trails causing Indonesia has many volcanoes which have rich minerals, namely
 - a. Sircum Mediteranian and Sircum Pasific
 - b. Sircum Anatonian and Sircum Antony
 - c. Sircum Antarctic and Sircum Atlantic
 - d. Sircum Gaza and Sircum Gazi
12. Google Maps and Google Earth belong to
 - a. flat maps
 - b. relief maps
 - c. blind maps
 - d. digital maps
13. The person who makes a map is called
 - a. a map expert
 - b. a cartography
 - c. a cartographer
 - d. a photographer
14. Look at the following map.



- A part of the map indicated by the circle is
- a. a map title
 - b. a map inset
 - c. a map index
 - d. a map scale

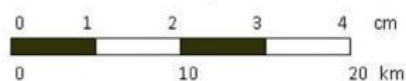
15. Look at the following legend of map.

1.  = capital pf the province	8.  = inactive volcano
2.  = district capital	9.  = harbor
3.  = district	10.  = provincial boundary
4.  = active volcano	11.  = rail road
5.  = lake	12.  = school
6.  = river	13.  = highway
7.  = airport	

From the legend of map above which includes the line symbol is shown number ...

- 1, 7, 12
 - 5, 10, 11
 - 6, 10, 13
 - 11, 12, 13
16. Color symbols on maps are usually used to describe ...
- seaports, rivers, lakes, highways, mountainous areas
 - highways, railways, national borders
 - highland areas, lowland areas, rivers, airports
 - lakes, mountainous area, lowlands, highlands

17. Look at the following scale.



If the distance on the map is **3cm** then the actual distance is ... km.

- 12.5
 - 13
 - 15
 - 16.5
18. The seabed is lower than the surrounding area is called ...
- continental slope
 - bottom of the sea
 - sea trench
 - sea back
19. Space that defined by the location at latitude and longitude is a/an ...
- relative space
 - relational space
 - absolute space
 - outer space
20. The comparison between the distances on the map with the actual distance to the Earth is called ...
- map title
 - map scale
 - orientation
 - astronomic line