















Money

Coin Values			
COIN	FRONT	BACK	VALUE
Penny			One Cent
Nickel			Five Cents
Dime			Ten Cents
Quarter			Twenty Five Cents
Half Dollar			Fifty Cents

Draw lines to match the pictures of the coins to their correct names and values.

COIN	NAME	VALUE
	quarter	10 cents
	penny	1 cent
	dime	25 cents
	nickel	5 cents

Write the total amount of money at the end of the row.

     	_____
   	_____
    	_____
   	_____
     	_____