


# Counting Money


1. How many  will make \$1.00? \_\_\_\_\_


2. How many  will make \$1.00? \_\_\_\_\_

3. How many  will make .50¢? \_\_\_\_\_

4. How many  will make \$1.00? \_\_\_\_\_

5. How many  will make .50¢? \_\_\_\_\_

6. How many  will make .50¢? \_\_\_\_\_

7. How many  will make \$1.00? \_\_\_\_\_

8. How many  will make .50¢? \_\_\_\_\_

9. How many  will make .75¢? \_\_\_\_\_

10. How many  and  will make .25¢? \_\_\_\_\_