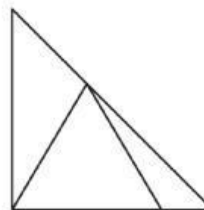
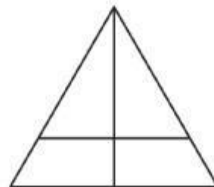
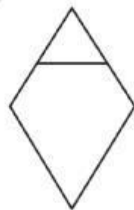
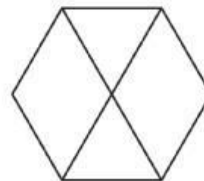
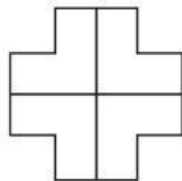
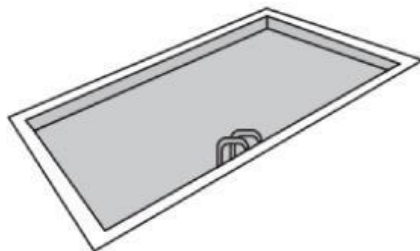


Tick ✓ the shapes that show quarters.

Colour one quarter in each of those shapes.



Would you measure these things using centimetres or metres?



Length of a swimming pool

\_\_\_\_\_



Length of a bar of chocolate

\_\_\_\_\_



Length of your shoe

\_\_\_\_\_



Length of 5 paper clips joined together

\_\_\_\_\_



Length of a bus

\_\_\_\_\_



Length of a worm

\_\_\_\_\_