
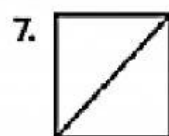


Write how many equal parts. Shade one part. Write its unit fraction.




— equal parts

unit fraction: 



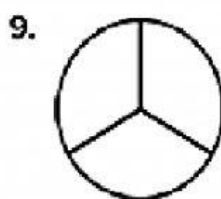
— equal parts

unit fraction: 




— equal parts

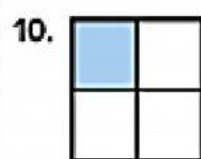
unit fraction: 



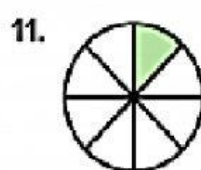
— equal parts

unit fraction: 

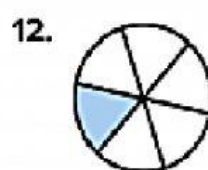
Circle the correct unit fraction for the shaded section of each model.



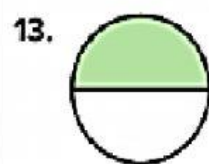
$\frac{1}{3}$ $\frac{1}{4}$



$\frac{1}{8}$ $\frac{1}{6}$




$\frac{1}{5}$ $\frac{1}{6}$



$\frac{1}{2}$ $\frac{1}{3}$



$\frac{1}{3}$ $\frac{1}{4}$



$\frac{1}{5}$ $\frac{1}{6}$

