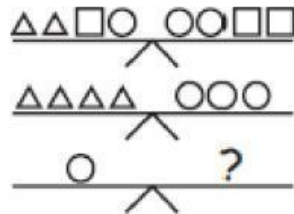


# Shape balance

## I. LEVEL 1

What number should be the replacement for the question mark?

A



Answer: \_\_\_\_\_

B

$$\begin{aligned} \bullet + \bullet + \blacktriangle &= 18 \\ \bullet + \bullet + \bullet + \blacktriangle + \blacktriangle &= 31 \\ \bullet &= ? \quad \blacktriangle = ? \end{aligned}$$

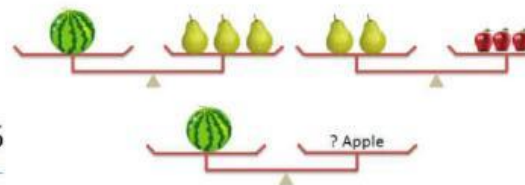
Answer: \_\_\_\_\_

C

$$\begin{aligned} \text{Squirrel} + \text{Chicken} &= 25 \\ \text{Squirrel} + \text{Squirrel} + \text{Squirrel} + \text{Chicken} + \text{Chicken} &= 65 \\ \text{Squirrel} &= ? \quad \text{Chicken} = ? \end{aligned}$$


Answer: \_\_\_\_\_

D



Answer: \_\_\_\_\_

E



F

$$\begin{aligned} \square + \bigcirc &= \triangle + \triangle + \triangle + \triangle \\ \bigcirc &= \triangle + \triangle \\ \square &= ? \quad \bigcirc \end{aligned}$$

Answer: \_\_\_\_\_

Answer: \_\_\_\_\_

**II. LEVEL 2****Problem 1:**

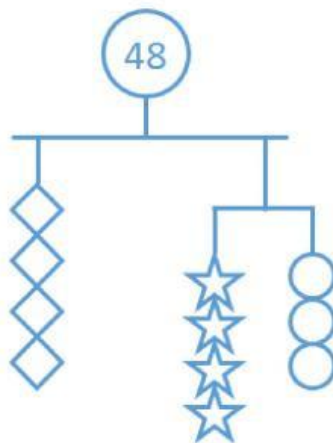
$$\square\square\square\square\square\square + \star\star\star\star = 50$$

$$\square + \star = 11$$

What is the value represented by  $\square$  ?

- (A) 3      (B) 4      (C)      (D) 6      (E) 8

Answer: \_\_\_\_\_

**Problem 2:** Find the value of each shape

Answer: \_\_\_\_\_

**Problem 3:** In the diagram, two equal-armed balances are shown.How many  $\bigcirc$  could it take to balance  $\square\square\square\square$ 

- (A) 2      (B) 1      (C) 4      (D) 5      (E) 3

Answer: \_\_\_\_\_

**Problem 4:** In the diagram, each scale shows the total mass (weight) of the shapes on that scale.

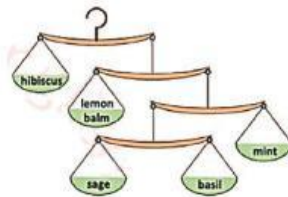
What is the mass (weight) of a  $\triangle$  ?  $\triangle$



- (A) 3      (B) 5      (C) 12   (D) 6      (E) 5.5

**Answer:** \_\_\_\_\_

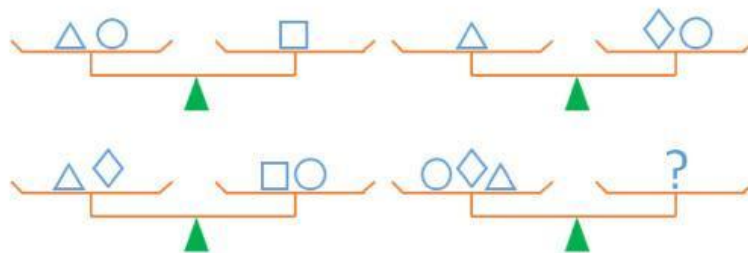
**Problem 5:** To cook an elixir a witch needs five types of herbs exactly in the amounts weighed by the scales in the picture. The witch knows that she needs to put 5 grams of sage into the elixir. How many grams of hibiscus does she have to use ? (The weight of the scales is irrelevant.)



- (A) 50g      (B) 40g      (C) 30g      (D) 20g      (E) 10g

**Answer:** \_\_\_\_\_

**Problem 6:**

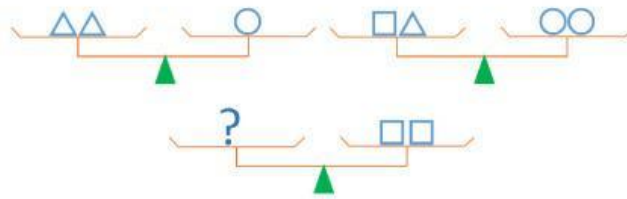


All four scales shown are balanced. One possible replacement for the ? is

- (A)  $\triangle \square$       (B)  $\diamond \triangle$       (C)  $\circ \square$   
 (D)  $\square \diamond$       (E)  $\triangle \circ$

**Answer:** \_\_\_\_\_

**Problem 7:**

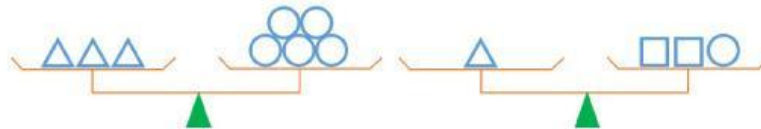


All three scales shown are balanced. One possible replacement for the ? is

- (A)  $\bigcirc \triangle$       (B)  $\bigcirc \triangle \triangle$       (C)  $\bigcirc \bigcirc \triangle$   
 (D)  $\bigcirc \bigcirc \triangle \triangle$       (E)  $\bigcirc \bigcirc \bigcirc \triangle$

### III. LEVEL 3

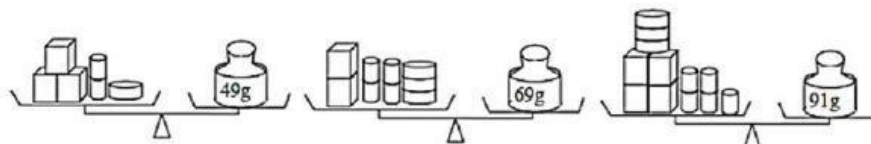
**Problem 1:** In the diagram, two equal-armed balances are shown. How many  $\square$  would it take to balance one  $\bigcirc$  ?



- (A) 1      (B) 2      (C) 3      (D) 4      (E) 5

**Answer:** \_\_\_\_\_

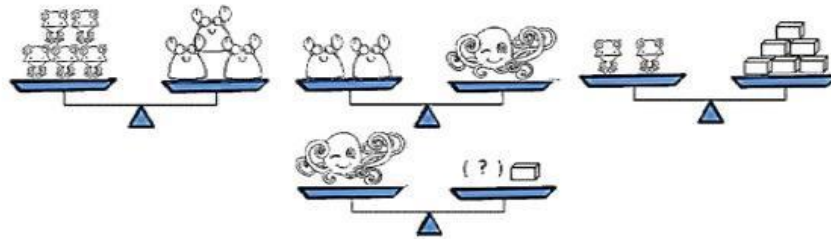
**Problem 2:** The three weighing scales are balanced as shown. What is the sum weight of the these 3D shapes in grams ?  $\square + \text{cylinder} + \text{disk}$



- (A) 20      (B) 22      (C) 27      (D) 31

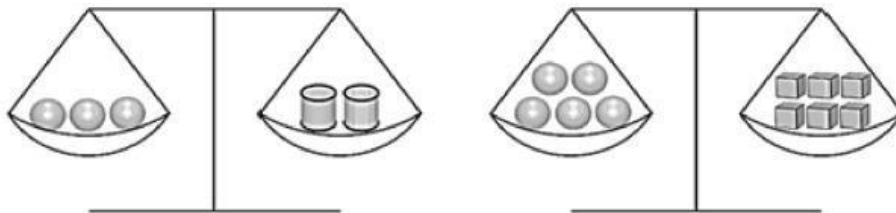
**Answer:** \_\_\_\_\_

**Problem 3:** How many  $\square$  are equivalent to the weight of one ?



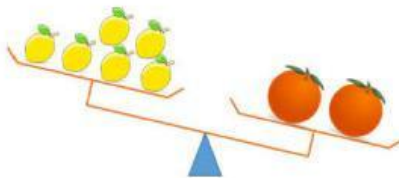
Answer: \_\_\_\_\_

**Problem 4:** There are three kinds of objects, cylinders and cubes. Three spheres have the same total weight as two cylinders, and five spheres have the same total weight as six cubes. How many cubes will have the same total weight as five cylinders ?



Answer: \_\_\_\_\_

**Problem 5:** On one of the plates of a balance there are 6 oranges and on the other there are melons. When we put a melon exactly like the others on the orange plate, the balance is equilibrated.

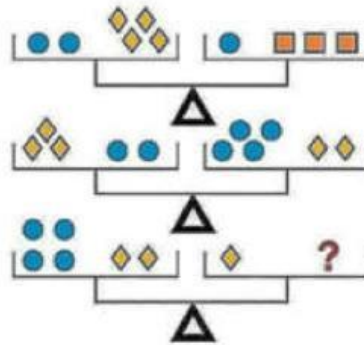


- |                          |                          |
|--------------------------|--------------------------|
| A. the same as 2 oranges | B. the same as 3 oranges |
| C. the same as 4 oranges | D. the same as 5 oranges |
| E. the same as 6 oranges |                          |

Answer: \_\_\_\_\_



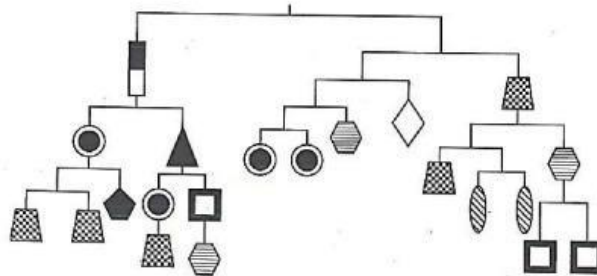
**Problem 6:** How many possible combinations of given shapes are there for the question mark?



**Answer:** \_\_\_\_\_

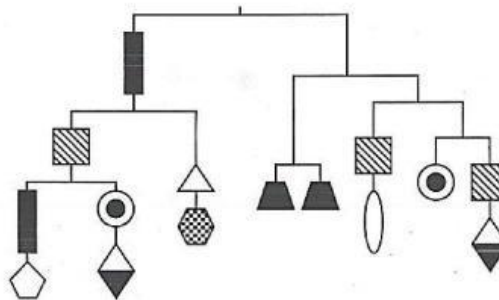
#### IV. LEVEL 4

**Problem 1:** Find the value of each shape if the total weight is 160 g



**Answer:** \_\_\_\_\_

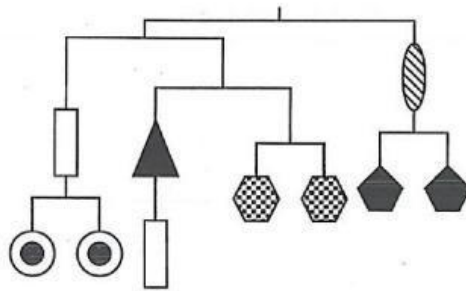
**Problem 2:** Find the value of each shape if the total weight is 80 g and the square is 1 g heavier than the diamond, the triangle is lighter than the hexagon.



**Answer:** \_\_\_\_\_

#### Problem 3:

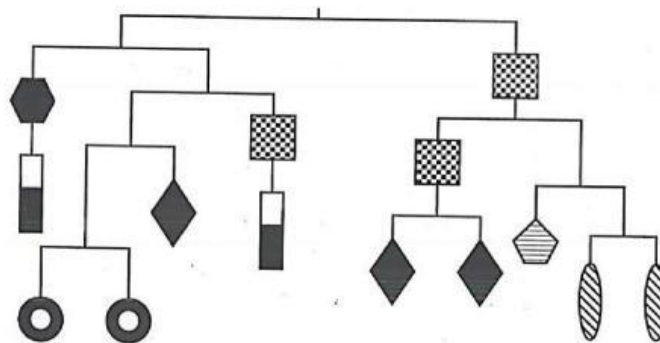
Find the value of each shape if the total weight is 48 g. The circle is heavier than the rectangle and the total weight of the circle and the hexagon is lighter than the pentagon's.



Answer: \_\_\_\_\_

**Problem 4:**

Find the value of each shape if the total weight is 96 g.



Answer: \_\_\_\_\_