

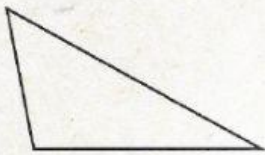
Triangles




Practice

Identify the triangles in at least two ways.

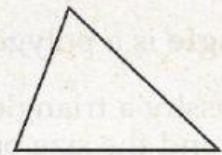
1.



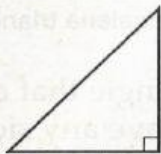
2.



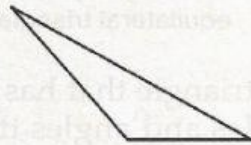
3.



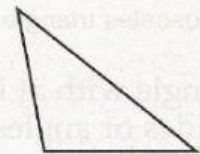
4.



5.



6.



Drag the name to match the triangle.

Isosceles

Equilateral

Scalene

Right angle

