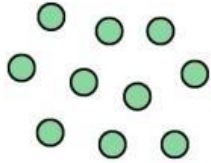



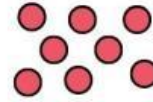
STATES OF MATTER

Solid Liquid Gas

Write the state of matter that matches the molecules in the images below:







Write the state of matter that matches the images below:







Write the state of matter that correctly corresponds to the descriptions below

- not rigid
- not a fixed shape
- fixed volume

- rigid
- fixed shape
- fixed volume

- not rigid
- not a fixed shape
- no fixed volume

Draw an example of each state of matter in the boxes below. Different than the samples above.

| Solid |
|-------|
| |

| Liquid |
|--------|
| |

| Gas |
|-----|
| |