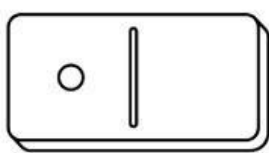
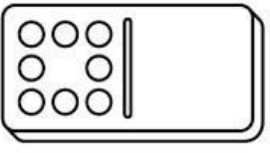
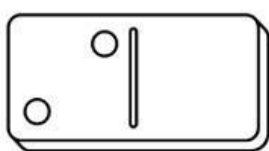
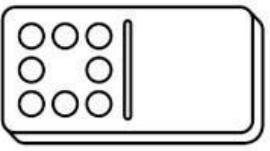
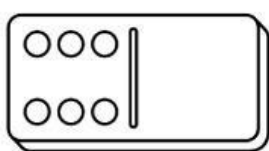
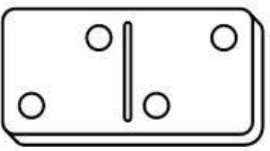


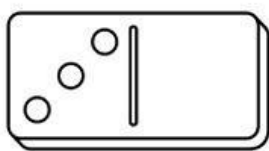
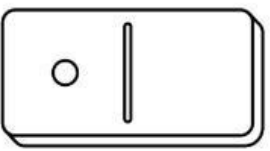
# DOMINÓ

Coloca el valor correspondiente.

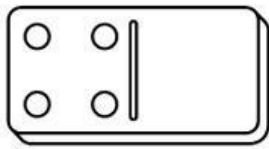
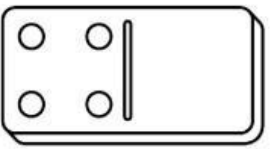
 +  = \_\_\_\_\_

 +  = \_\_\_\_\_


 +  = \_\_\_\_\_

 +  = \_\_\_\_\_

 +  = \_\_\_\_\_

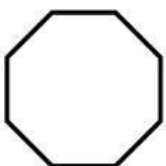

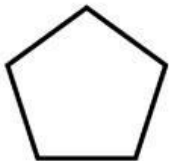
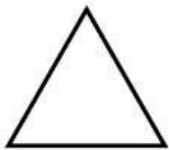


 +  = \_\_\_\_\_

 +  = \_\_\_\_\_



# FIGURAS GEOMETRICAS

Arrastra la figura con la opción correcta.



- rectángulo
- hexágono
- pentágono
- círculo
- triangulo
- óvalo
- octágono
- cuadrado

# Antes y después

Escribí los números que están antes y después del número en el medio.

8	9	10
---	---	----

	7	
--	---	--

	6	
--	---	--

	11	
--	----	--

	3	
--	---	--

	3	
--	---	--

	5	
--	---	--

	5	
--	---	--

	12	
--	----	--

	4	
--	---	--

	18	
--	----	--

	2	
--	---	--