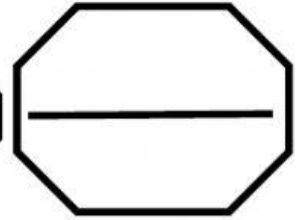


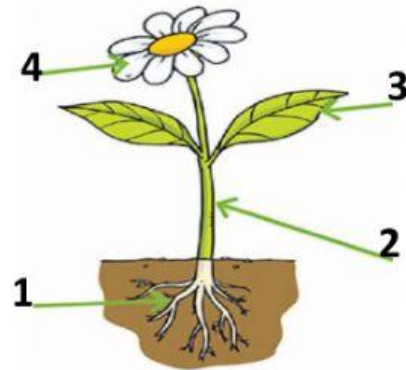
Quiz 1: lesson 1 (plant parts)

name: ..... (1 / .....)

Question 1 : choose the correct answer:

1-What part of the plant is #1?

- A. flower
- B. stem
- C. root
- D. leaf



2-What part of the plant is # 4?

- A. flower
- B. stem
- C. root
- D. leaf

3-All plants have these parts.

- A. Leaves and roots
- B. Leaves and stems
- C. Roots and stems
- D. Roots, leaves and stems

4-Which part have many colored petals

- A. roots
- B. stem
- C. flower
- D. leaf

5-The **main stem** of a tree is called .....

- A. flower
- B. stem
- C. root
- D. trunk




6-**All plants** look the **same**.

- A. True
- B. False

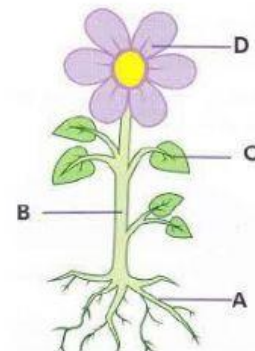
6-What part of a plant is shown in this image?

- A. roots
- B. flower
- C. stem
- D. leaf



7-The **stem** of the plant is indicated by the letter:

- A. (A)
- B. (B)
- C. (C)
- D. (D)



9-What is the **color** of plants **leaves**?

- A. red
- B. green
- C. brown
- D. white

10-What plant part is shown here?

- A. roots
- B. flower
- C. stem
- D. leaf



11-What part of the plant is shown above?

- A. Roots
- B. Fruit
- C. Stem
- D. Trunk



12-All plants have same flowers. True or False?

- A. True
- B. False

13-which parts like hair in the soil?

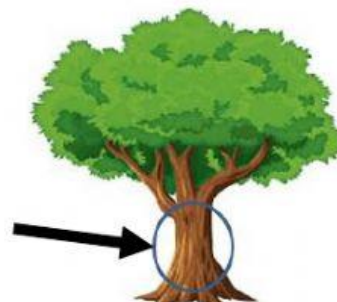
- A. leaves
- B. roots
- C. stem
- D. flower

14-what part is strong and tall, cylinder shape?

- A. leaves
- B. roots
- C. stem
- D. flower

14-What is this part of the tree called?

- A. branches
- B. trunk
- C. leaves
- D. stem



15- Leaves have different shapes.

- A. True
- B. False



16- A trunk is usually covered with strong layer, is called .....

- A. flower
- B. bark
- C. Trunk
- D. stem



17- structures of plants are .....

- A. similar
- B. different

18- Which part of this plant we can eat?

- A. leaves
- B. roots
- C. stem
- D. flower



19- Which part of this plant we can eat?

- A. leaves
- B. roots
- c. stem
- D. flower



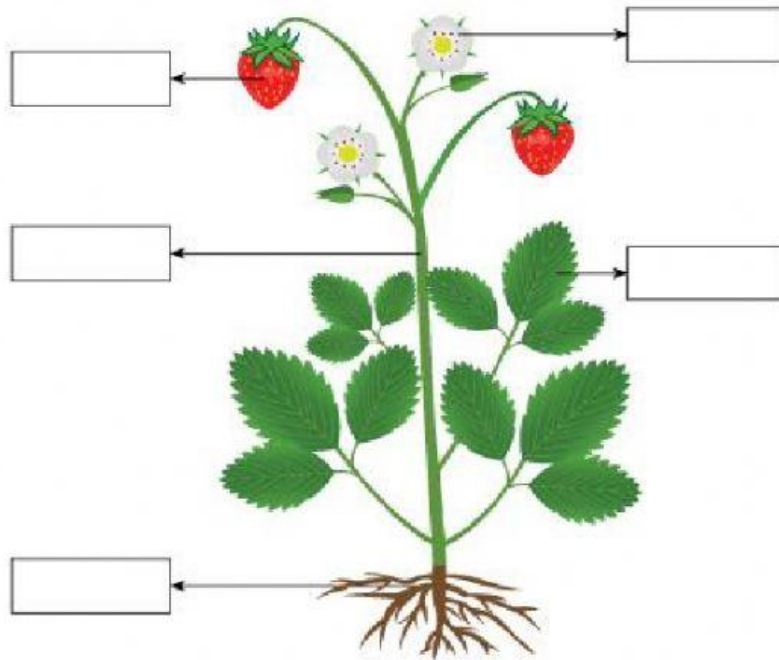
20- which part hard to see?

- A. leaves
- B. roots
- c. stem
- D. flower



**Question 2 : Write the name of plant parts:**

leaf	stem	Fruit	roots	Flower
------	------	-------	-------	--------



**Q3: Find the words**

l	e	a	f	m	x	s	e	e	d
u	f	p	m	u	a	t	u	b	v
y	l	l	f	v	g	e	h	g	z
c	o	m	j	a	u	m	m	b	a
p	w	f	d	o	h	j	d	i	s
y	e	b	b	d	t	i	u	r	f
i	r	t	o	o	r	e	f	o	y
j	a	f	b	h	j	x	u	b	u

stem

seed

fruit

leaf

root

flower



**Q4: Draw a line connecting each plant structure with its name.**

Stem

Brown, looks like hair, in soil

Roots

Green, feels waxy, curved

leaf

Strong and tall, cylinder shape

Flower

White and pink with many petals

**Q 5 : Write name of picture in the bottom:**



.....



.....

Bank words

Trunk

Stem