

Name: _____

Mathematics

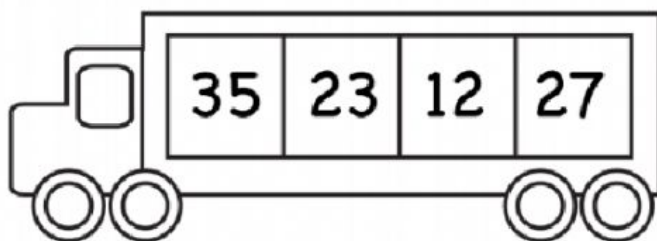
Counting to 50



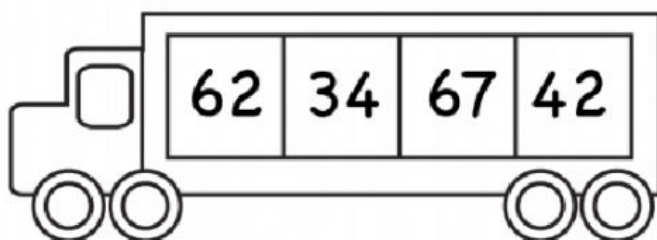
Let's count to 50. Fill in the missing numbers.

1		3		5			8		10
11				15		17		19	
21		23			26			29	
31		33		35			38		40
	42		44			47		49	

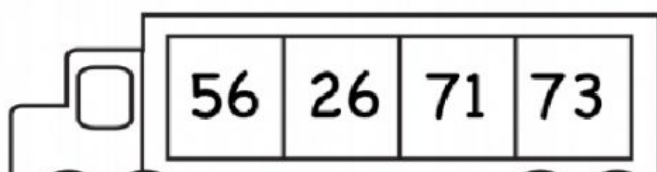
Look at the numbers below. Put them in order from **least to greatest**.



--	--	--	--















--	--	--	--



--	--	--	--

Look at the numbers below. Put them in order from **greatest to least**.

 <table border="1"><tbody><tr><td>63</td><td>27</td><td>95</td><td>32</td></tr></tbody></table> 	63	27	95	32	 <table border="1"><tbody><tr><td></td><td></td><td></td><td></td></tr></tbody></table> 				
63	27	95	32						
 <table border="1"><tbody><tr><td>46</td><td>59</td><td>74</td><td>93</td></tr></tbody></table> 	46	59	74	93	 <table border="1"><tbody><tr><td></td><td></td><td></td><td></td></tr></tbody></table> 				
46	59	74	93						
 <table border="1"><tbody><tr><td>82</td><td>23</td><td>91</td><td>47</td></tr></tbody></table> 	82	23	91	47	 <table border="1"><tbody><tr><td></td><td></td><td></td><td></td></tr></tbody></table> 				
82	23	91	47						