




WORKSHEET -1

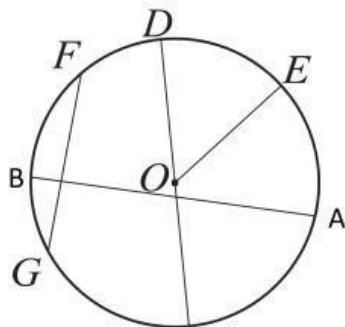
I. CHOOSE THE CORRECT ANSWER:

- Which of the following can be used to trace a circle?  
a) Book      b) Wire      c) Coin
- Which among the following can be used to trace a bigger circle?  
a) ₹ 5 coin    b) ₹ 2 coin    c) 50 paise coin
- Which of the following vehicle's tyres has the biggest radius?  
a) Motorcycle      b) car      c) autorickshaw
- A circle is formed by \_\_\_\_\_ line.  
a) Straight    b) zig-zag    c) curved
- Choose the option which is a circle.  
a)     b)     c) 

II. FILL IN THE BLANKS:

- The distance from the centre of the circle to the boundary in any direction is called \_\_\_\_\_ of the circle.
- The longest chord of a circle is called \_\_\_\_\_.
- The distance around the circle is called \_\_\_\_\_.
- A circle always has \_\_\_\_\_ centre(s).
- The diameter of a circle always passes through its \_\_\_\_\_.

III. DRAG AND DROP THE PARTS OF THE FOLLOWING CIRCLE:



- O = \_\_\_\_\_
- OE = \_\_\_\_\_
- BA = \_\_\_\_\_
- FG = \_\_\_\_\_



