



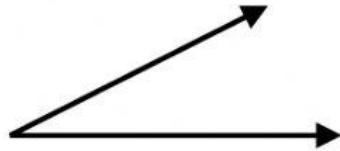
Name _____ Date _____

Identifying Angles



Directions: Identify the following angles.

1

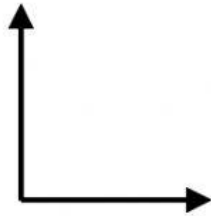


a. Right Angle

b. Acute Angle

c. Obtuse Angle

2



a. Right Angle

b. Acute Angle

c. Obtuse Angle

3

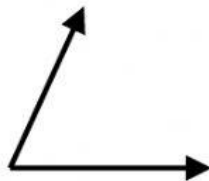


a. Right Angle

b. Acute Angle

c. Obtuse Angle

4

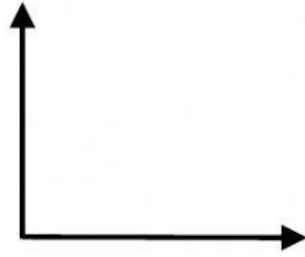


a. Right Angle

b. Acute Angle

c. Obtuse Angle

5




a. Right Angle

b. Acute Angle

c. Obtuse Angle

6

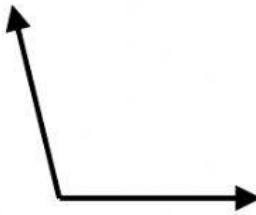


a. Right Angle

b. Acute Angle

c. Obtuse Angle

7



a. Right Angle

b. Acute Angle

c. Obtuse Angle

8



a. Right Angle

b. Acute Angle

c. Obtuse Angle