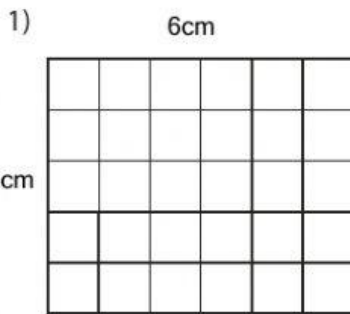
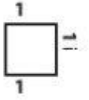
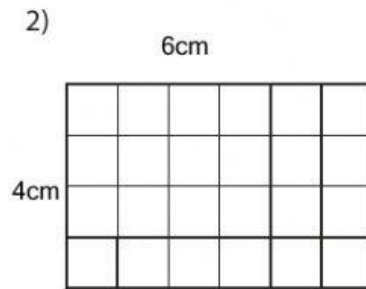


## Perimetri

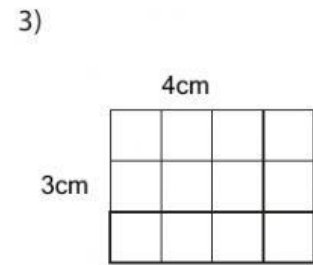
Njehso perimetrin e secilës formës së dhënë. Një katrorë është me brinjë 1 cm.



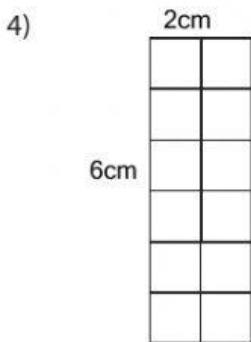
Perimeter = \_\_\_\_\_



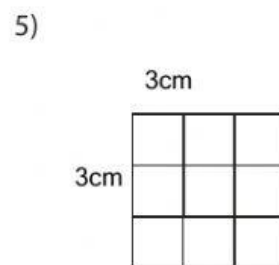
Perimeter = \_\_\_\_\_



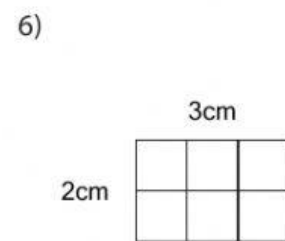
Perimeter = \_\_\_\_\_



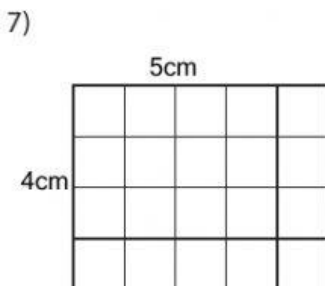
Perimeter = \_\_\_\_\_



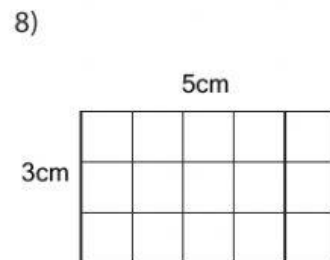
Perimeter = \_\_\_\_\_



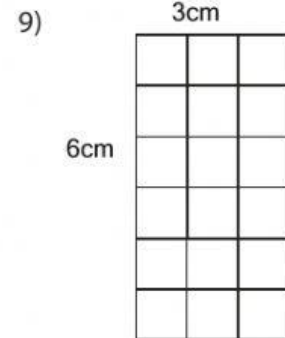
Perimeter = \_\_\_\_\_



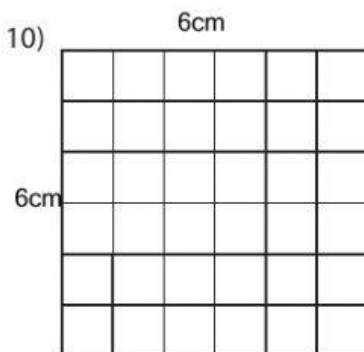
Perimeter = \_\_\_\_\_



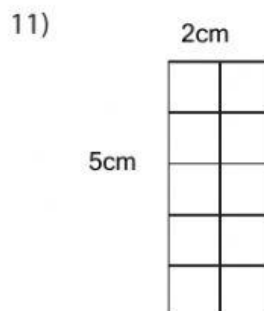
Perimeter = \_\_\_\_\_



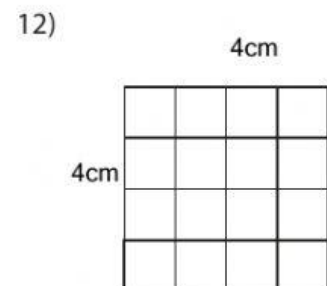
Perimeter = \_\_\_\_\_



Perimeter = \_\_\_\_\_



Perimeter = \_\_\_\_\_



Perimeter = \_\_\_\_\_