

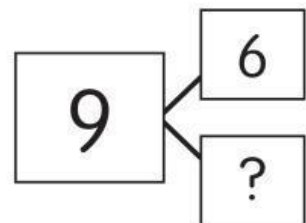
**Solve the problems.**

- 1 There are 6 blue shoes and 4 brown shoes.  
How many fewer brown shoes?

$$6 - 4 = \underline{\quad}$$

       fewer brown shoes

- 2 Complete the addition sentence  
that helps you find  $9 - 6$ .  
Complete the subtraction sentence.



$$6 + \underline{\quad} = 9$$

$$9 - 6 = \underline{\quad}$$



- 3 4 black beads and 3 gray beads.  
How many beads in all?

$$4 + 3 = \underline{\quad}$$

- 4 7 birds sing. 2 are blue.  
The rest are red.  
How many birds are red?

$$7 - 2 = \underline{\quad}$$

$$2 + \underline{\quad} = 7$$



- 5 Jan has 6 shells. Fay has 10 shells.  
How many more shells does Fay have?

$$\underline{\quad} = 10 - 6$$

Fay has        more shells.

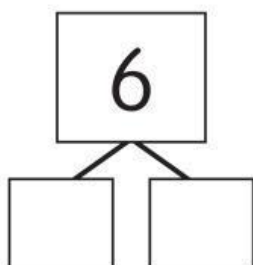
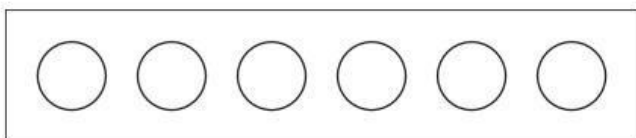
- 6 9 ducks are in a pond. 4 swim away.  
How many are left?

$$9 - 4 = \underline{\quad}$$

$$9 = 4 + \underline{\quad}$$



- 7 Color some circles red and some blue.  
Complete the number bond.  
Write a subtraction and an addition sentence.



$$\underline{\quad} - \underline{\quad} = \underline{\quad}$$
$$\underline{\quad} + \underline{\quad} = \underline{\quad}$$

- 8 5 zebras and 3 monkeys.  
How many animals in all?

$$\underline{\quad} = 5 + 3$$

9 There are 10 flags. 8 are white.

The rest are blue.

How many are blue?

\_\_\_\_\_ flags are blue.

Use pictures, numbers, or words to show your thinking.



- 10 5 balloons fly. Some pop.  
Now 3 balloons fly.  
How many balloons popped?  
Boom says 8 balloons popped.  
Buzz says 2 balloons popped.

Who is right? Circle one: Boom Buzz

Use pictures, numbers, or words to  
show your thinking.

