








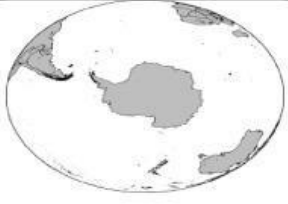




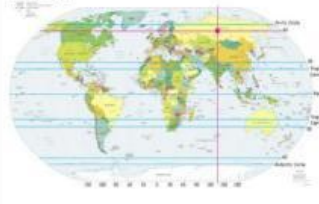






GE6 UNIT 1 OUR WORLD 1

1. Look and match the words in the box with the corresponding pictures:

latitude	south pole	coordinate	mountain range	furious
volcano	horizontal	nervous	continents	north pole
frightened	countries	longitude	vertical	equator
lane	parallel		city	street

2. Read and choose the correct answer:

_____ are imaginary vertical lines running from the North Pole to the South Pole.

a. Equator	b. Latitudes	c. Longitudes
------------	--------------	---------------

_____ imaginary horizontal lines which are parallel to the equator.

a. Equator	b. Latitudes	c. Longitudes
------------	--------------	---------------

_____ are large land masses of the earth surrounded by water.

a. Countries	b. Continents	c. Coordinate
--------------	---------------	---------------

The _____ is an imaginary line at an equal distance from the North and the South Poles.

a. equator	b. longitude	c. latitude
------------	--------------	-------------

A _____ is an area of land that has its own government and laws.

a. continent	b. country	c. coordinate
--------------	------------	---------------

I _____ here since I graduated from high school.

a. was working	b. worked	c. have worked
----------------	-----------	----------------

Oh my gosh! I think I _____ my key chain at the barber shop.

a. have left	b. leave	c. left
--------------	----------	---------

3. Read and answer the following questions in complete sentences:

Name three mountain ranges you learned in the previous lesson. Which one is located in Central Vietnam?

How many countries are there in the world?

Are there any volcanoes in Vietnam?
