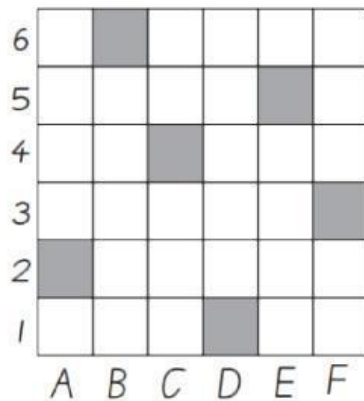


1. Write the positions of the shaded squares.

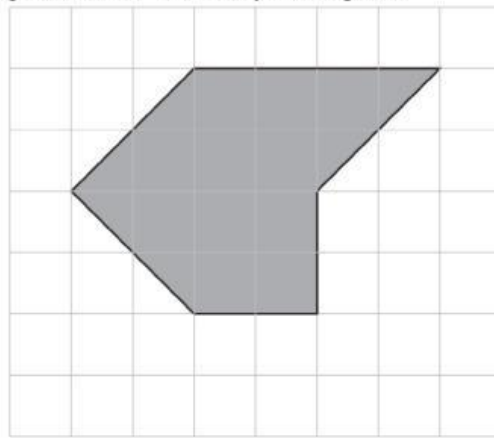


.....

.....

.....

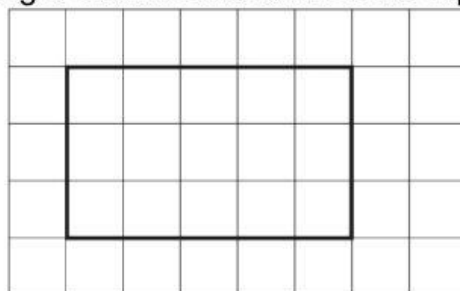
2. Here is a polygon on a 1cm square grid.



What is the area of this shape?

.....cm²

3. Here is a rectangle drawn on a centimetre square grid.



Find the perimeter of the rectangle.

..... cm