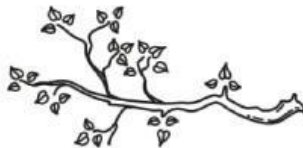


ACHIEVEMENT		COMMENT
<input type="checkbox"/> Excellent	<input type="checkbox"/> Fair	
<input type="checkbox"/> Good	<input type="checkbox"/> Need improvement	

**I. Look at the pictures in each row. Circle the picture that is long.**



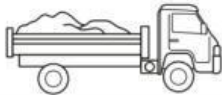
**II. Look at the objects on the left. Circle the word light if the object is light.  
Circle the word heavy if the object is heavy.**



light      heavy



light      heavy



light      heavy



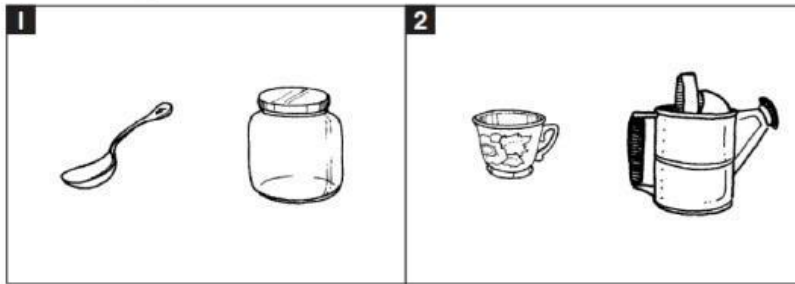
light      heavy

**III. Look at each picture and decide if it should be weighed in grams or kilograms. Circle the answer.**


<b>1</b>  grams      kilograms	<b>2</b>  grams      kilograms	<b>3</b>  grams      kilograms
<b>4</b>  grams      kilograms	<b>5</b>  grams      kilograms	<b>6</b>  grams      kilograms

#### IV. More or less.

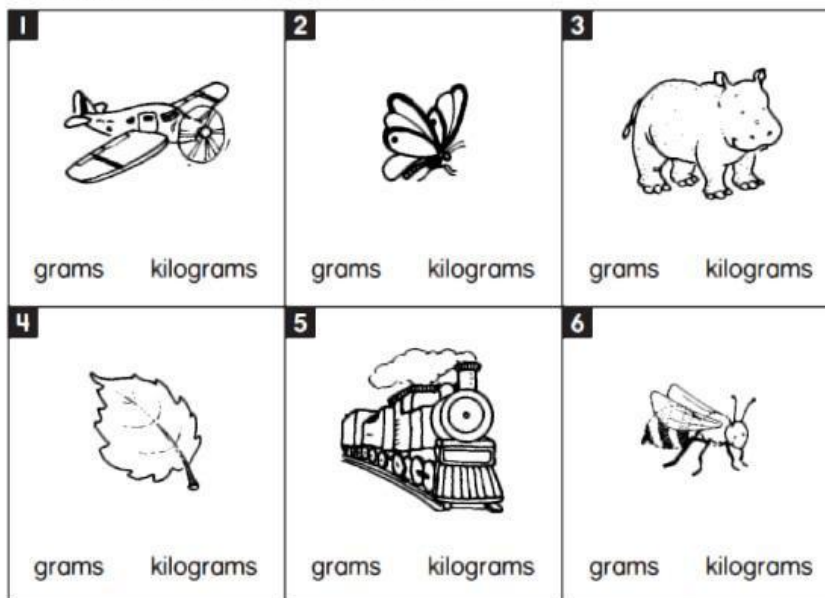
Circle the object that would hold **more** water.



Circle the one that would hold **less** water.



#### V. Look at each picture and decide if it should be weighed in grams or kilograms. Circle the answer.



#### VI. Circle.

