

Name: _____

Date: _____

LET'S BUILD A PIZZA



Instructions:



Page 1: Solve the math problems by dragging and dropping the correct answer to the math sentence.




Page 2: Follow the directions to build a pizza step by step by clicking on the correct amounts in order.



Page 3: Answer the question based on information from page 1 and page 2

LET'S BUILD A PIZZA



PEPPERONI $2 \times 4 =$



SPINACH $3 \times 4 =$



Answers:

1 8

1 9

6 12

18 18

PINAPPLE $3 \times 6 =$



CHEESE $1 + 0 =$

MARINARA SAUCE $1 \times 1 =$


OLIVES $9 \times 2 =$




BEEF $5 + 4 =$




MUSHROOMS $3 \times 2 =$



LET'S BUILD A PIZZA



Step 1. Add Sauce to Pizza Crust



Step 2. Add Cheese



Step 3. Add 2 bunches of Spinach




Step 4. Add one (1) set of Olives



Step 5. Add 6 pieces of Mushrooms



Step 6. Add 12 pieces of Pineapple



Step 7. Add 7 pieces of pepperoni



Step 8. Add ½ (half) of the pieces of Beef



LET'S BUILD A PIZZA

1. Which 2 toppings have the most pieces?
 - a. Pineapple + Olives
 - b. Beef + Spinach
 - c. Pepperoni + Beef
2. How many steps do you have in making a pizza?
 - a. 5 Steps
 - b. 7 Steps
 - c. 8 Steps
3. How many ingredients did we have in our pizza?
 - a. 7 ingredients
 - b. 8 ingredients
 - c. 9 ingredients
4. How do you think you did on this assignment?
 - a. I understood everything and could do it on my own
 - b. I couldn't do everything, but I tried hard
 - c. I could not do the assignment