

WORKSHEET

Date: 20/08/2023
Topic: FF0. Topic 5




Teacher's feedbacks

Task 1: Look and write the missing letters. (con nhìn hình và viết các chữ cái còn thiếu nhé)




__ta__




Sq__a__e



H__ar__




T__iangl__




__v__l





Ci__c__e



Di__mo__d



R__cta__gle

Task 2: Listen and write numbers. (con nghe và viết số nhé)

Task 3: Choose the correct answer. (con chọn câu trả lời đúng nhé)

1. How many sides does the triangle have?

- A. The triangle has three sides.
- B. The triangle has four equal sides.
- C. The triangle has ten sides.




2. How many sides does the circle have?

- A. The circle has four sides.
- B. The circle has two long sides and two short sides.
- C. The circle has no sides.




3. How many sides does the diamond have?

- A. The diamond has no sides.
- B. The diamond has four sides.
- C. The diamond has three sides.




4. How many sides does the rectangle have?

- A. The rectangle has ten sides.
- B. The rectangle has four equal sides.
- C. The rectangle has two long sides and two short sides.



5. How many sides does the square have?

- A. The square has four equal sides.
- B. The square has no sides.
- C. The square has four sides.



6. How many sides does the star have?

- A. The star has two long sides and two short sides.
- B. The star has ten sides.
- C. The star has no sides.

