

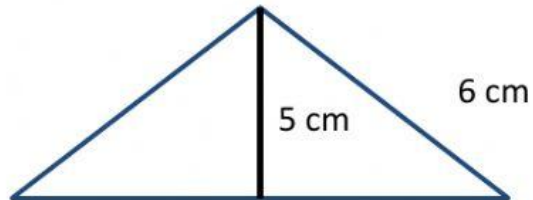
Name: _____

Date: _____

"AREA"

FIND THE AREA OF THE FOLLOWING

1.

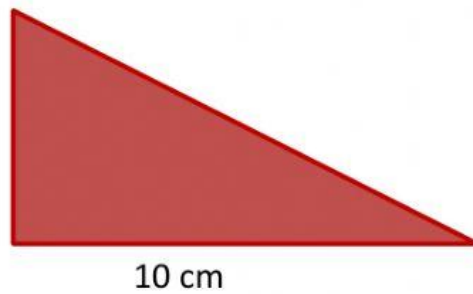


Solution:

Final Answer : _____

2.

6 cm



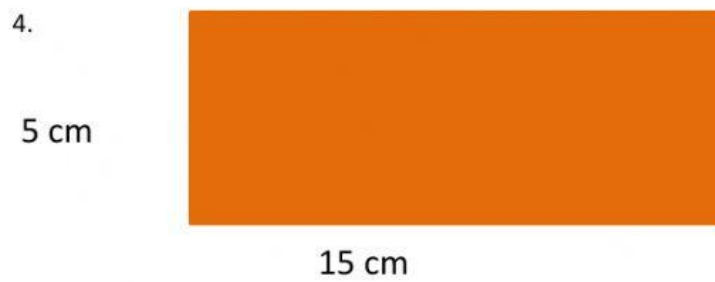
Solution:

Final Answer : _____



Solution:

Final Answer: _____



Solution:

Final Answer : _____