

Name: \_\_\_\_\_

Date: \_\_\_\_\_

**"PERIMETER"**

FIND THE PERIMETER OF THE FOLLOWING

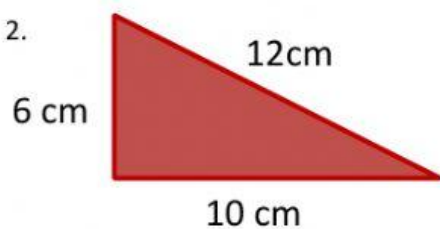
1.



Solution:

Final Answer : \_\_\_\_\_

2.



Solution:

Final Answer : \_\_\_\_\_

3.



Solution:

Final Answer : \_\_\_\_\_

4.

8 cm




13 cm

Solution:

Final Answer : \_\_\_\_\_

5.

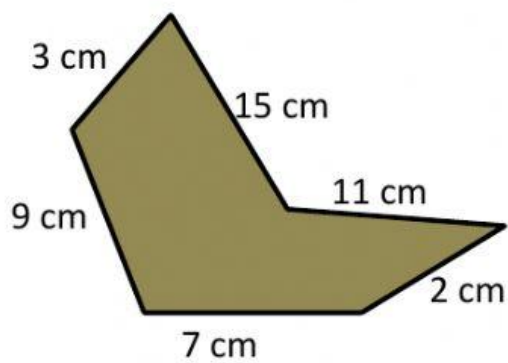


12 cm

Solution:

Final Answer : \_\_\_\_\_

6.



Solution:

Final Answer : \_\_\_\_\_